

Name: \_\_\_\_\_




Class: \_\_\_\_\_ Date: \_\_\_\_\_

**1**  $5.32 \div 10 \times 1000 =$

**2**  $3.9 \times 100 \div 1000 =$

**3** What is 20% of 180?

**4** What is 25% of 460?



In each case find the value of the letter.

**5**  $67 - a = 18$

$a =$

**6**  $9(b + 4) = 108$


$b =$

**7** Lay out and solve:  $4 \cdot 26 \times 23 =$

Show  
your  
method

**8** Lay out and solve:  $3198 \div 26 =$


Show  
your  
method



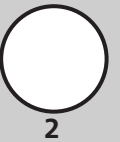
1



1



2



2


Solve these fraction questions, simplifying answers if possible.

9

$$\frac{3}{4} - \frac{1}{6} = \square$$

10

$$\frac{1}{4} \times \frac{2}{3} = \square$$



**For teacher use**

Your mark	_____ out of 12
What went well	
How to improve	