

Please check the examination details below before entering your candidate information

Candidate surname

Other names

Centre Number

Candidate Number

Pearson Edexcel International GCSE

Wednesday 31 May 2023

Afternoon (Time: 1 hour 30 minutes)

Paper
reference

4BN1/02

Bangladesh Studies

**PAPER 2: The landscape, people and economy
of Bangladesh**

You do not need any other materials.

Total Marks

Instructions

- Use **black** ink or ball-point pen.
- **Fill in the boxes** at the top of this page with your name, centre number and candidate number.
- Answer **all** questions.
- Answer the questions in the spaces provided
– *there may be more space than you need.*
- Calculators may be used.

Information

- The total mark for this paper is 75.
- The marks for **each** question are shown in brackets
– *use this as a guide as to how much time to spend on each question.*

Advice

- Read each question carefully before you start to answer it.
- Try to answer every question.
- Check your answers if you have time at the end.

Turn over ►

P72608A

©2023 Pearson Education Ltd.

N:1/1/1/1



Pearson

Answer ALL questions. Write your answers in the spaces provided.

Some questions must be answered with a cross in a box ☒. If you change your mind about an answer, put a line through the box ☒ and then mark your new answer with a cross ☒.

SECTION A

The Physical Environment

You should aim to spend no more than 30 minutes on this section.

- 1 (a) Study Figure 1, which shows a diagram of a tropical cyclone.

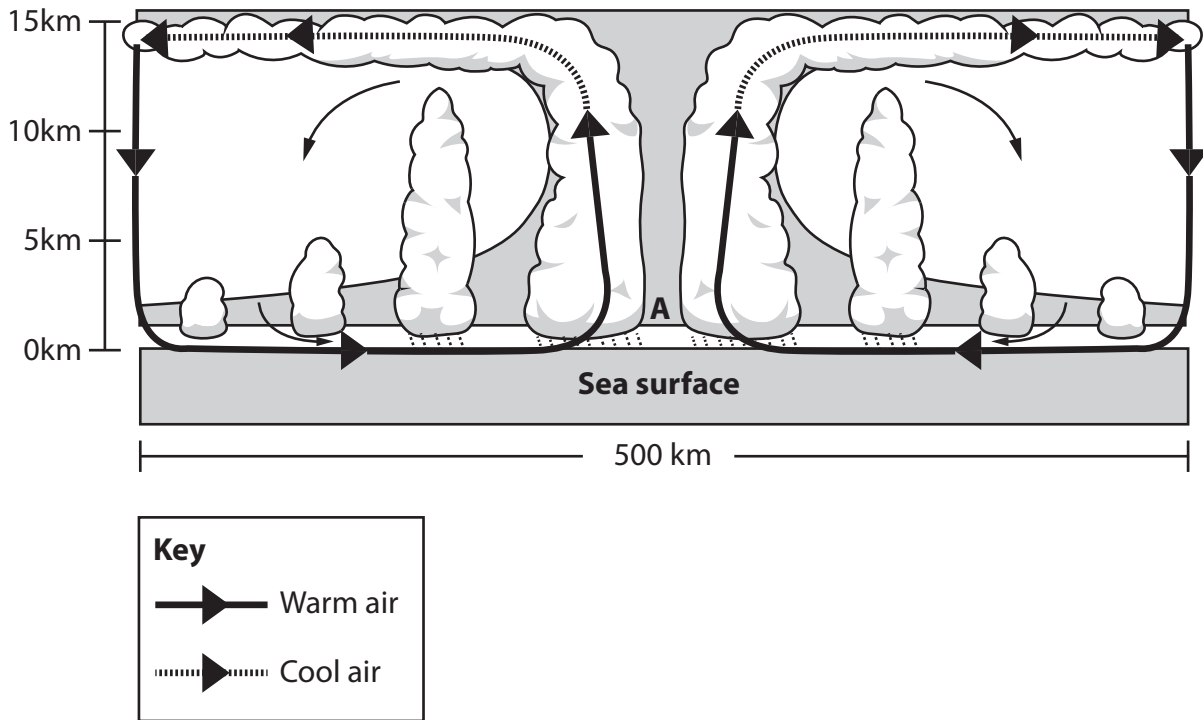


Figure 1

A diagram of a tropical cyclone

- (i) Identify the feature labelled A.

(1)

<input type="checkbox"/>	A clouds
<input type="checkbox"/>	B eye
<input type="checkbox"/>	C fast moving winds
<input type="checkbox"/>	D rain band

- (ii) State **one** factor that can result in the formation of a tropical cyclone.

(1)



DO NOT WRITE IN THIS AREA

DO NOT WRITE IN THIS AREA

DO NOT WRITE IN THIS AREA

(b) State **two** primary impacts of earthquakes in Bangladesh.

(2)

- 1
- 2

(c) Explain **one** cause of the formation of the Ganges delta.

(3)

.....

.....

.....

.....

.....

.....



(d) Study Figure 2, which shows illegal mangrove wood collection in the Sundarbans mangrove forest in Bangladesh.



(Source: Images & Stories / Alamy Stock Photo)

Figure 2

Illegal mangrove wood collection in the Sundarbans

Suggest **two** environmental impacts of exploiting mangrove forests.

(4)

1

.....

.....

.....

2

.....

.....

.....



(e) Explain how international agencies have responded to flood events in Bangladesh.

(6)

DO NOT WRITE IN THIS AREA

DO NOT WRITE IN THIS AREA

DO NOT WRITE IN THIS AREA

Area with horizontal dotted lines for writing.



(f) Assess why expanding the use of renewable energy resources is more important than expanding non-renewable energy resources in Bangladesh.

(8)

DO NOT WRITE IN THIS AREA

DO NOT WRITE IN THIS AREA

DO NOT WRITE IN THIS AREA

(Total for Question 1 = 25 marks)

TOTAL FOR SECTION A = 25 MARKS



DO NOT WRITE IN THIS AREA

DO NOT WRITE IN THIS AREA

DO NOT WRITE IN THIS AREA

SECTION B

The Human Environment

You should aim to spend no more than 30 minutes on this section.

- 2 (a) Study Figure 3, which shows information about the top four sources and values of remittances sent to Bangladesh in 2019.

Country	Value (Bangladeshi taka ₳ million)
Saudi Arabia	BDT 344,700
UAE	BDT 212,300
Oman	BDT 106,500
Qatar	BDT 87,500

Figure 3

Information on sources and values of remittances sent to Bangladesh in 2019

- (i) Identify the total value of remittances sent to Bangladesh in 2019. (1)

<input type="checkbox"/>	A ₳ 601,000 million
<input type="checkbox"/>	B ₳ 651,000 million
<input type="checkbox"/>	C ₳ 751,000 million
<input type="checkbox"/>	D ₳ 801,000 million

- (ii) Define the term **remittances**. (1)

.....

.....

- (b) State **two** reasons why people work in informal services in Bangladesh. (2)

1

2



(c) Explain **one** challenge facing the railway transport system in Bangladesh.

(3)

.....

.....

.....

.....

.....

.....

DO NOT WRITE IN THIS AREA

DO NOT WRITE IN THIS AREA

DO NOT WRITE IN THIS AREA



(d) Study Figure 4, which shows information about the components of food security.

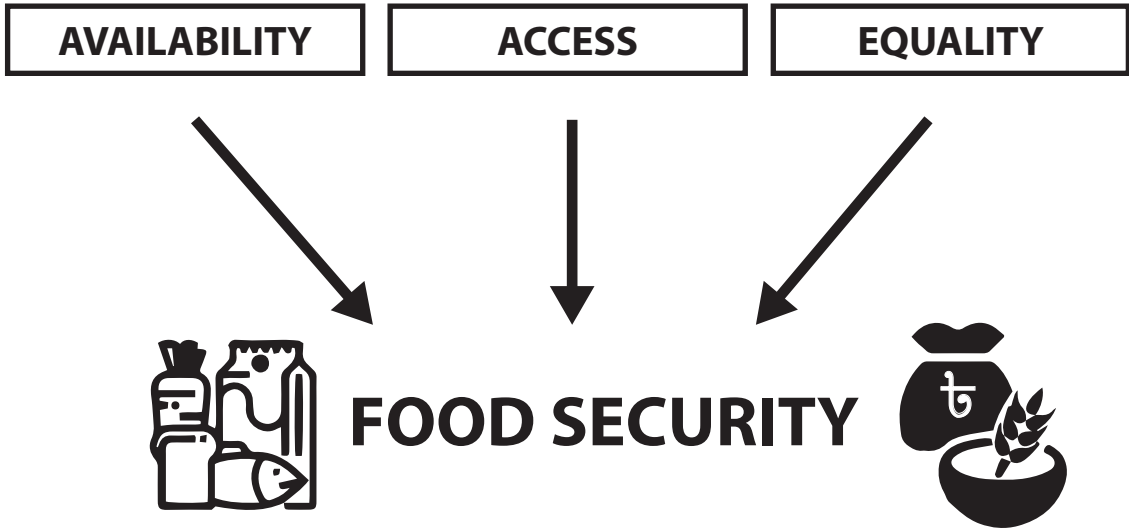


Figure 4
Components of food security

Suggest **two** ways that food security can be improved in Bangladesh.

(4)

1

2

DO NOT WRITE IN THIS AREA

DO NOT WRITE IN THIS AREA

DO NOT WRITE IN THIS AREA



(e) Explain how secondary sector industries affect the environment of Bangladesh.

(6)

Area with horizontal dotted lines for writing the answer.

DO NOT WRITE IN THIS AREA

DO NOT WRITE IN THIS AREA

DO NOT WRITE IN THIS AREA



(f) Assess the importance of improvements in communication technology for the economic development of Bangladesh.

(8)

DO NOT WRITE IN THIS AREA

DO NOT WRITE IN THIS AREA

DO NOT WRITE IN THIS AREA

Area with horizontal dotted lines for writing the answer.

(Total for Question 2 = 25 marks)

TOTAL FOR SECTION B = 25 MARKS



SECTION C

Challenges for Bangladesh

You should aim to spend no more than 30 minutes on this section.

- 3 (a) Study Figure 5, which shows trends in demographic data for Bangladesh from 2004 to 2018.

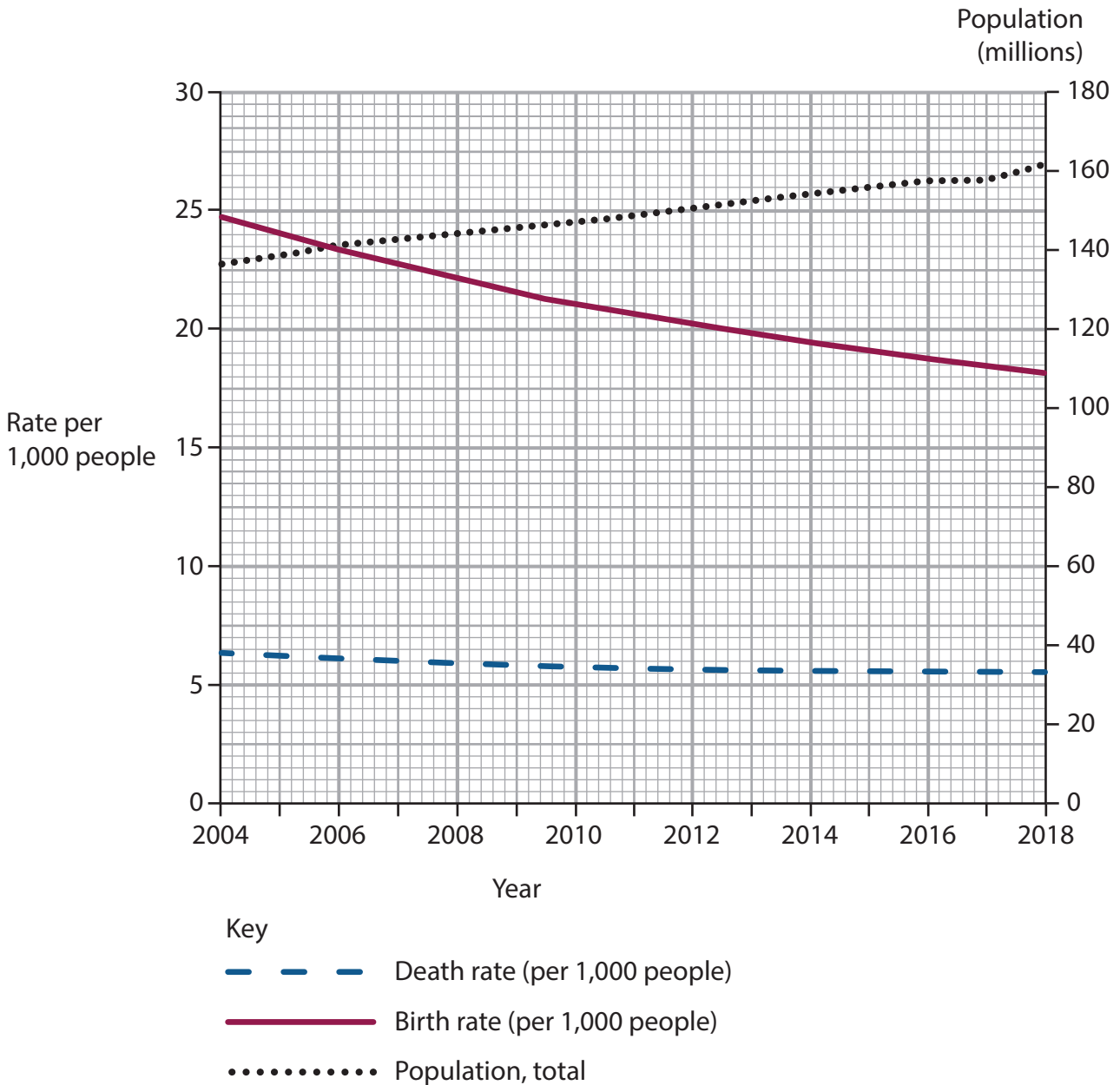


Figure 5

Demographic data for Bangladesh, 2004–2018

DO NOT WRITE IN THIS AREA

DO NOT WRITE IN THIS AREA

DO NOT WRITE IN THIS AREA



(i) Identify the birth rate for Bangladesh in 2010.

(1)

<input type="checkbox"/>	A 6 per 1,000 people
<input type="checkbox"/>	B 11 per 1,000 people
<input type="checkbox"/>	C 21 per 1,000 people
<input type="checkbox"/>	D 150 per 1,000 people

(ii) Define the term **natural increase**.

(1)

.....

.....

(b) State **two** ways of measuring the development of Bangladesh.

(2)

1

2

(c) Explain **one** way the government supports rural communities in Bangladesh.

(3)

.....

.....

.....

.....

.....

.....

.....



(d) Study Figure 6, which shows the population structure for Bangladesh in 1990 and 2020.

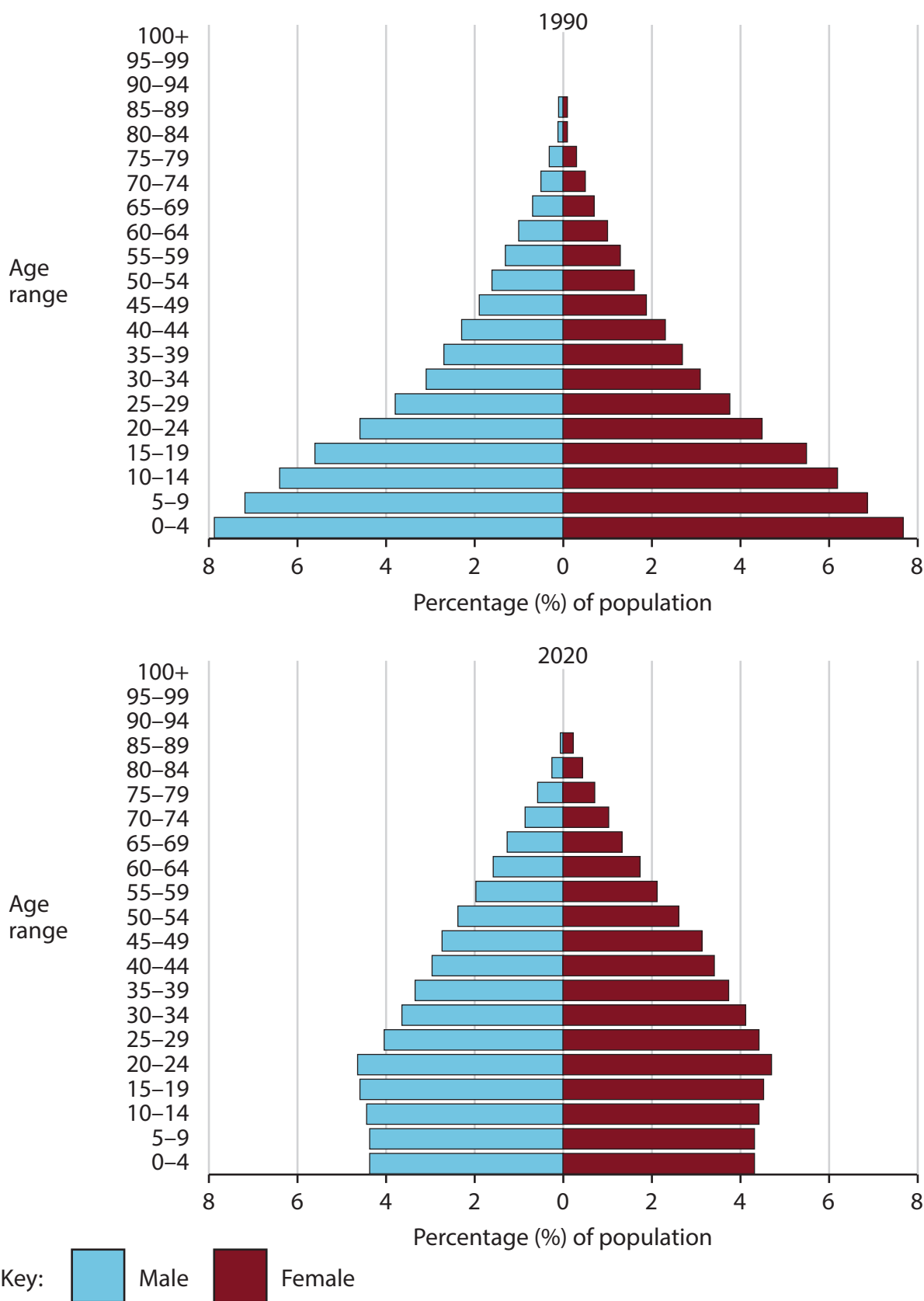


Figure 6

Population structure of Bangladesh in 1990 and 2020



Suggest **two** reasons for the changes in the population structure of Bangladesh between 1990 and 2020.

(4)

1

.....

.....

.....

2

.....

.....

.....

DO NOT WRITE IN THIS AREA

DO NOT WRITE IN THIS AREA

DO NOT WRITE IN THIS AREA



(e) Explain how human activity in Bangladesh contributes to climate change.

(6)

Area with horizontal dotted lines for writing the answer.

DO NOT WRITE IN THIS AREA

DO NOT WRITE IN THIS AREA

DO NOT WRITE IN THIS AREA



(f) Evaluate the success of bottom-up strategies in improving the lives of people living in cities in Bangladesh.

(8)

DO NOT WRITE IN THIS AREA

DO NOT WRITE IN THIS AREA

DO NOT WRITE IN THIS AREA

(Total for Question 3 = 25 marks)

TOTAL FOR SECTION C = 25 MARKS
TOTAL FOR PAPER = 75 MARKS



DO NOT WRITE IN THIS AREA

DO NOT WRITE IN THIS AREA

DO NOT WRITE IN THIS AREA

BLANK PAGE



DO NOT WRITE IN THIS AREA

DO NOT WRITE IN THIS AREA

DO NOT WRITE IN THIS AREA

BLANK PAGE



P 7 2 6 0 8 A 0 1 9 2 0

DO NOT WRITE IN THIS AREA

DO NOT WRITE IN THIS AREA

DO NOT WRITE IN THIS AREA

BLANK PAGE

Pearson Education Ltd. gratefully acknowledges all the following sources used in the preparation of this paper:

Figure 1 – Source from: www.international.gc.ca/cil-cai/assets/images/cil-cai/images/maps-cartes/eng/bd.gif

Figure 3 – Source from: <https://www.worldbank.org/en/topic/migrationremittancesdiasporaissues/brief/migration-remittances-data>

Figure 5 – Source from: <https://databank.worldbank.org/databases/demographics>

Figure 6 – Source from: United States Census Bureau (<https://www.census.gov>)

