

Write your name here

Surname

Other names

**Pearson Edexcel
International GCSE**

Centre Number

--	--	--	--	--	--

Candidate Number

--	--	--	--	--	--

Pakistan Studies

Paper 2: The Land, People and Resources of Pakistan

Friday 16 May 2014 – Morning
Time: 1 hour 30 minutes

Paper Reference

4PA0/02

You do not need any other materials.

Total Marks

Instructions

- Use **black** ink or ball-point pen.
- **Fill in the boxes** at the top of this page with your name, centre number and candidate number.
- Answer **Question 1** and any **three** other questions.
- Answer the questions in the spaces provided
– *there may be more space than you need.*

Information

- The total mark for this paper is 60.
- The marks for **each** question are shown in brackets
– *use this as a guide as to how much time to spend on each question.*

Advice

- Read each question carefully before you start to answer it.
- Write your answers neatly and in good English.
- Check your answers if you have time at the end.
- Keep an eye on the time.

Turn over ►

P42692A

©2014 Pearson Education Ltd.

1/1/1/1



PEARSON

You MUST answer this question.

1 (a) (i) Name the longest river in Pakistan. (1)

(ii) Name the mountain range between Pakistan and China. (1)

(iii) Name **one** mountain pass between Pakistan and Afghanistan. (1)

(iv) Name the important Pakistani industry which uses limestone as a major raw material. (1)

(v) What name is given to a system of winds rotating inwards to an area of low atmospheric pressure? (1)

(vi) Which of the following is the approximate size of Pakistan? Put a cross in the correct box. (1)

- A** 80,000 km²
- B** 600,000 km²
- C** 800,000 km²
- D** 950,000 km²

(b) (i) What name is given to the type of agriculture that is 'rain-fed'? (1)

(ii) Name the new seaport opened in 2007. (1)

(iii) What is Pakistan's main export? (1)



(iv) Which of the following is the approximate size of Pakistan's population? Put a cross in the correct box.

(1)

- A 230 million
- B 190 million
- C 140 million
- D 100 million

(v) What term is used to describe money sent back to Pakistan by migrant workers?

(1)

(vi) Name the city in Sindh Province with the largest population.

(1)

(Total for Question 1 = 12 marks)



Answer any THREE of Questions 2–8.

If you answer Question 2 put a cross in the box .

2 (a) Study Figure 1(a) which shows the average monthly rainfall at Karachi and Lahore.

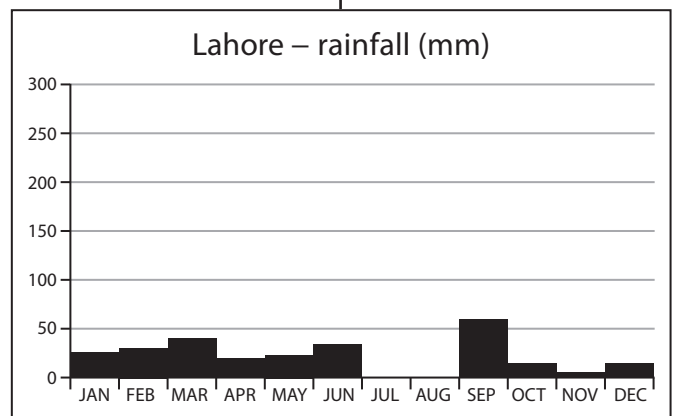
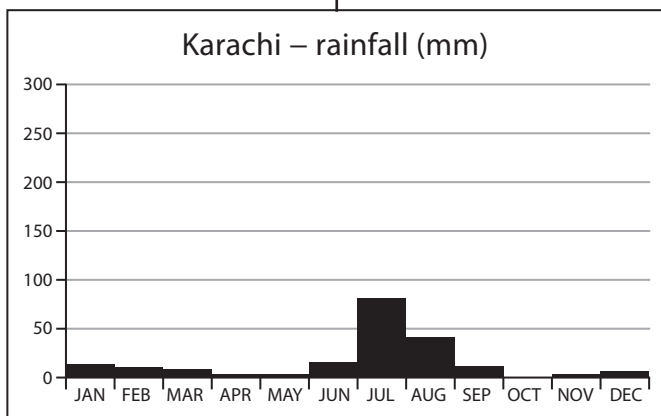
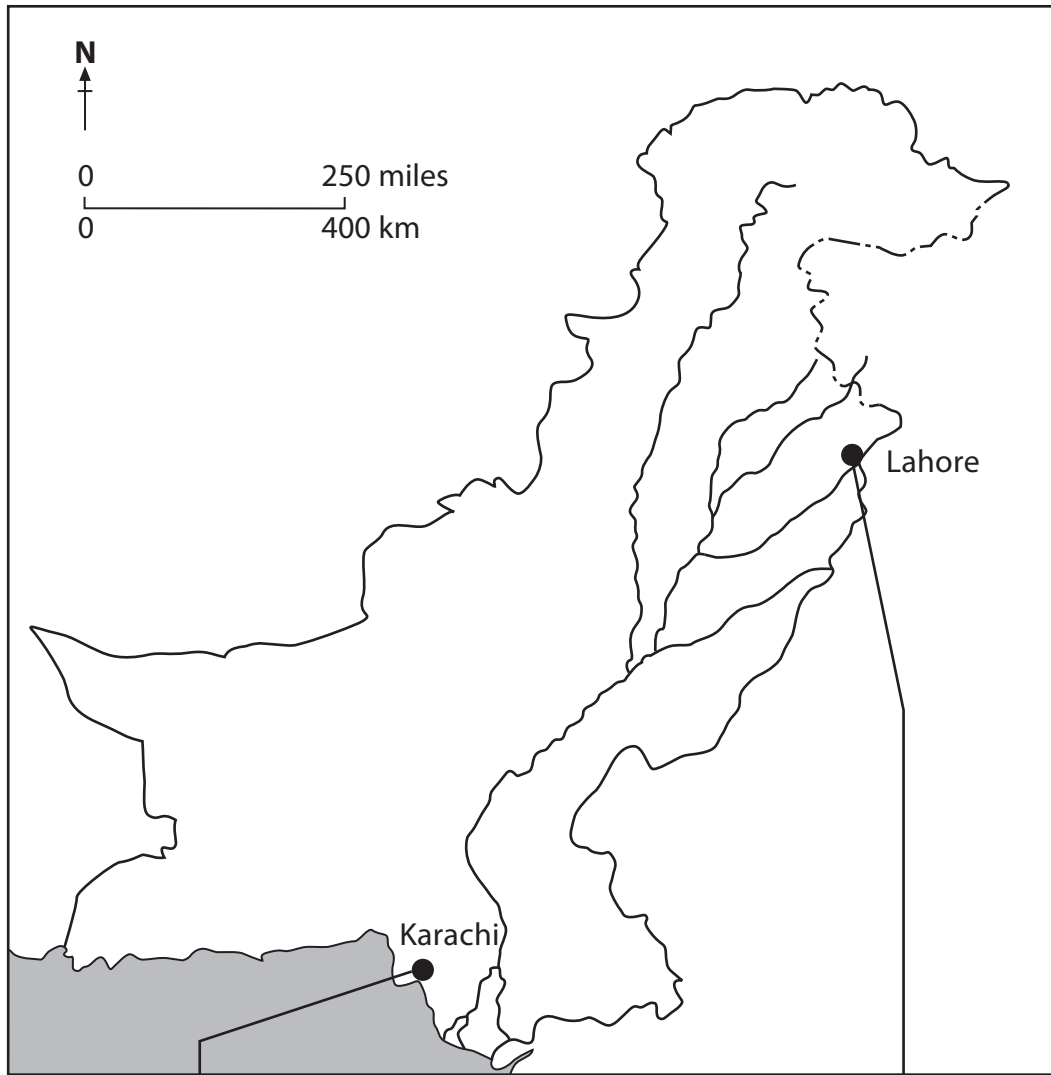


Figure 1(a)



(i) In which climatic zone is Karachi located? (1)

(ii) Complete the rainfall graph for Lahore using the information in Figure 1(b). (2)

Month	Lahore rainfall (mm)
July	200
August	160

Figure 1(b)

(iii) Describe how rainfall at Karachi varies throughout the year. Use data from Figure 1(a) in your answer. (3)

(iv) Explain why Lahore receives so much rainfall in July and August. (4)



(b) Explain the effects that flooding can have on the economy of Pakistan.

(6)

A series of horizontal dotted lines provided for writing the answer to the question.

(Total for Question 2 = 16 marks)



If you answer Question 3 put a cross in the box .

3 (a) Study Figure 2 which shows the location of the Kashmir earthquake (2005).

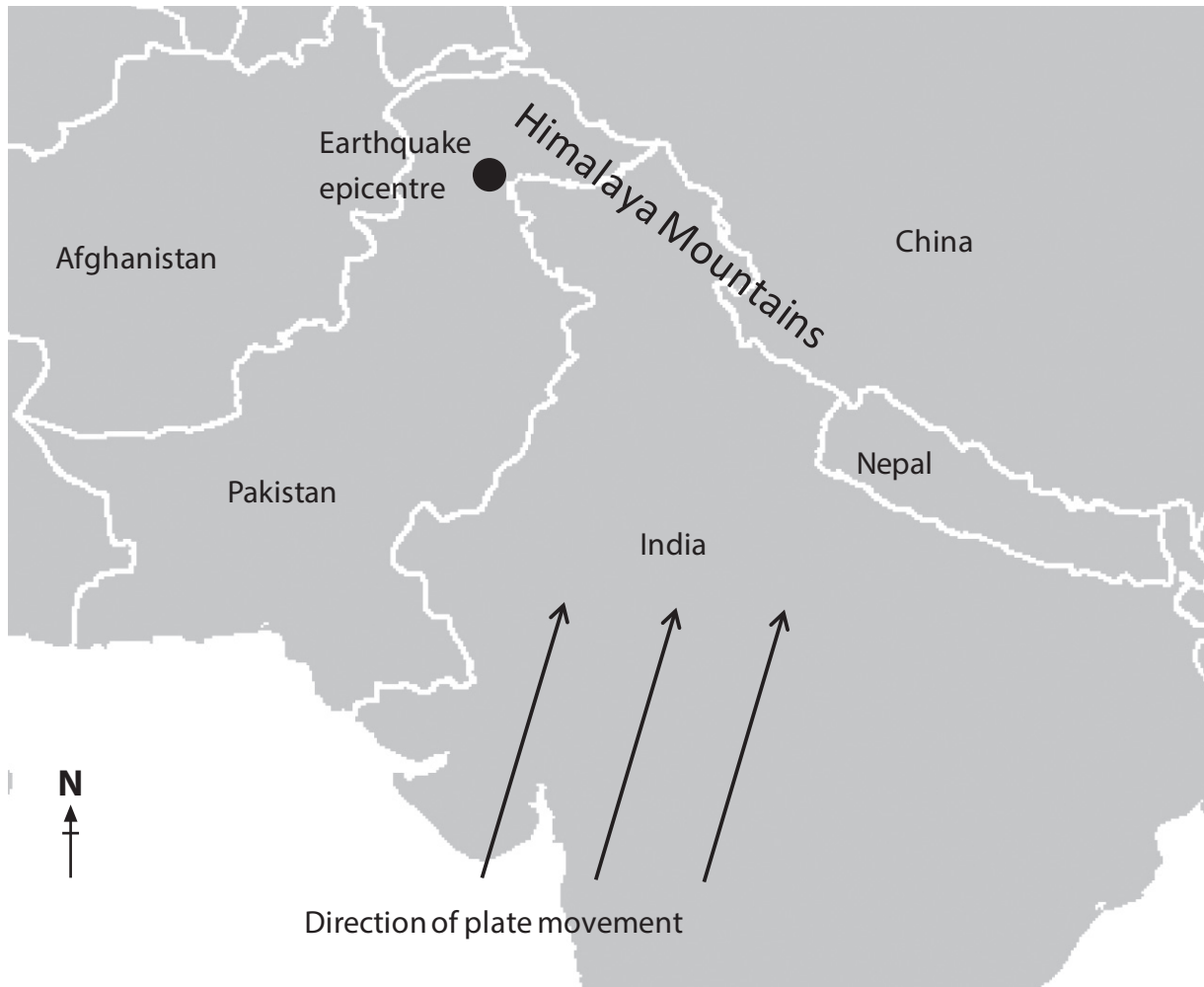


Figure 2

(i) Name the tectonic plate on which most of Pakistan is located.

(1)

(ii) What is:

(2)

1. the **epicentre** of an earthquake

2. the **focus** of an earthquake?



(iii) Outline why earthquakes occur in Pakistan.

(3)

(iv) Describe the effects that earthquakes, such as the one in Kashmir in 2005, have on people.

(4)



If you answer Question 4 put a cross in the box .

- 4 (a) Study Figure 3(a) which shows the percentages of the population of Sindh and North-West Frontier provinces living in urban and rural areas.

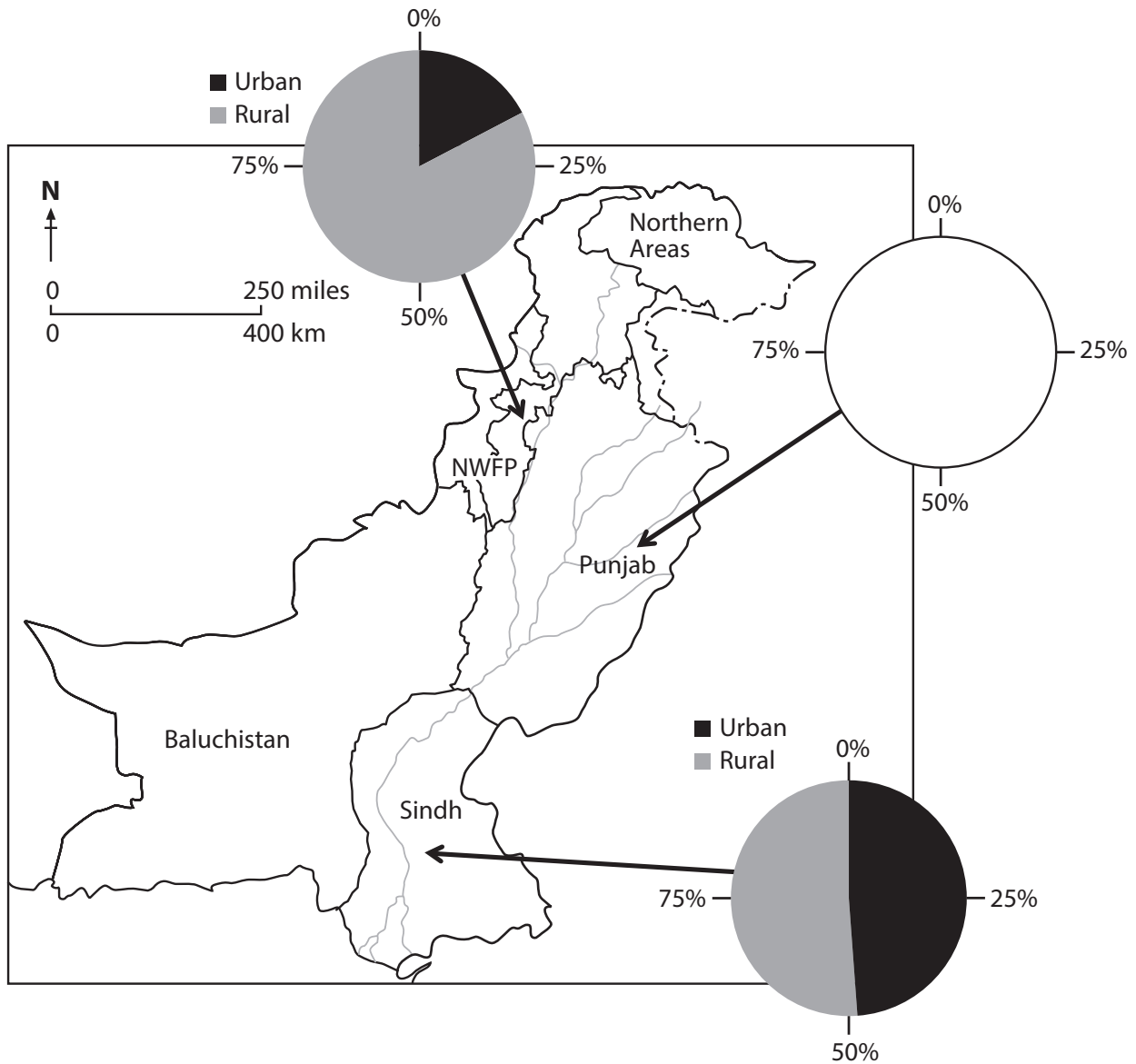


Figure 3(a)

- (i) What percentage of the population of Sindh Province live in urban areas?

(1)



(ii) Complete Figure 3(a) by constructing a pie chart for the Punjab Province using the information in Figure 3(b).

(2)

Province	Rural population (%)	Urban population (%)
Punjab	68	32

Figure 3(b)

(iii) Describe what the completed Figure 3(a) tells you about the distribution of urbanisation (people living in urban areas) in Pakistan.

(3)

.....

.....

.....

.....

.....

.....

(iv) Suggest reasons why the North-West Frontier Province has such a small urban population.

(4)

.....

.....

.....

.....

.....

.....

.....

.....

.....



BLANK PAGE

Turn over for Question 5.



If you answer Question 5 put a cross in the box .

- 5 (a) Study Figure 4(a) which shows percentage literacy rates for selected provinces of Pakistan.

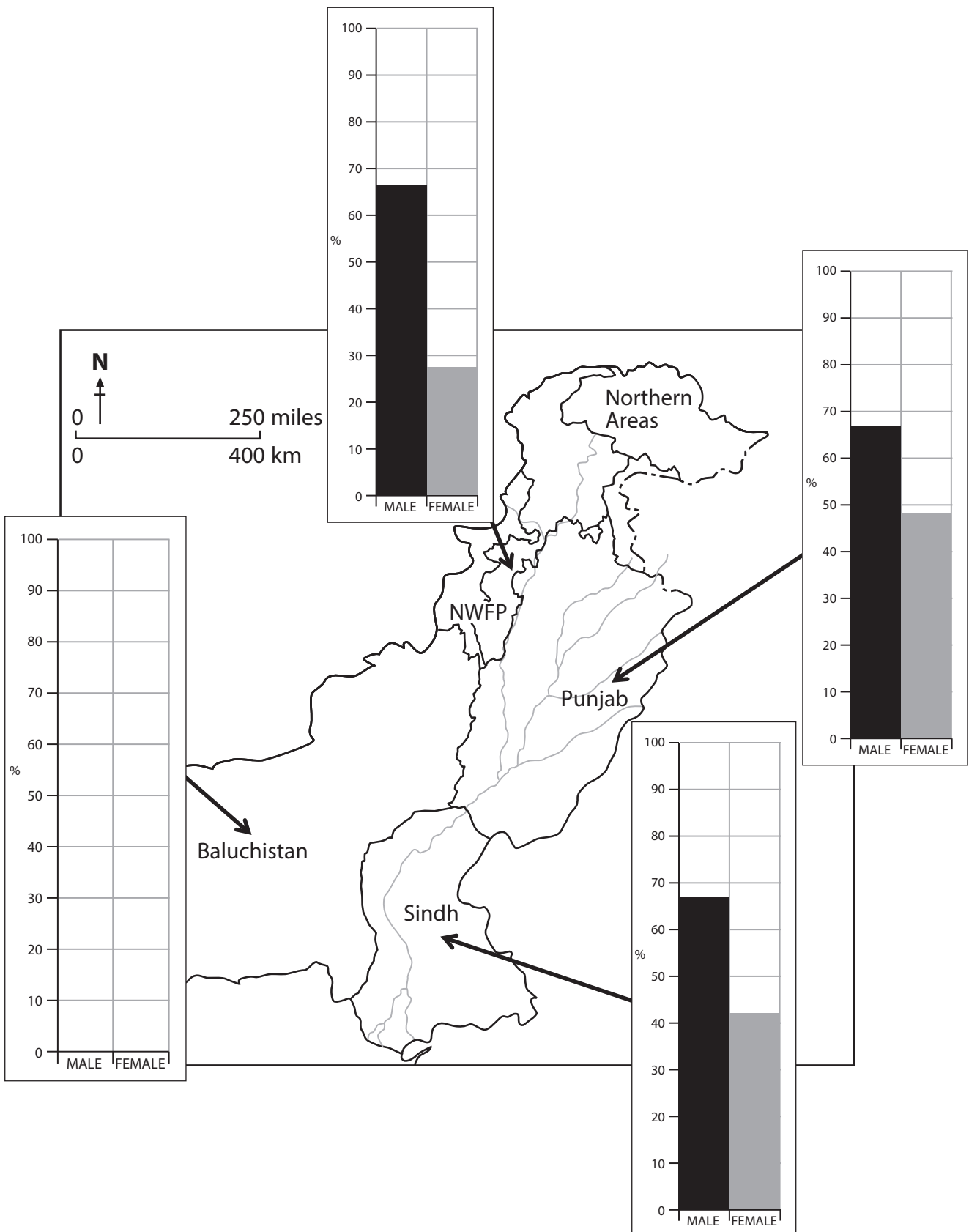


Figure 4(a)



(i) Which of the provinces shown in Figure 4(a) has the highest female literacy rate? (1)

(ii) Complete Figure 4(a) by constructing a bar chart for Baluchistan Province using the information shown in Figure 4(b). (2)

Province	Male literacy (%)	Female literacy (%)
Baluchistan	58	22

Figure 4(b)

(iii) Literacy is one aspect (indicator) of welfare in Pakistan. Describe **two** other possible indicators of welfare. (4)

1

.....

.....

2

.....

.....

(iv) Figure 4(a) shows that there is no literacy data for the Northern Areas (Gilgit). Suggest reasons for this lack of literacy data. (3)

.....

.....

.....

.....

.....



BLANK PAGE

Turn over for Question 6.



If you answer Question 6 put a cross in the box .

- 6 (a) Study Figure 5(a) which shows the distributions of three major crops grown in Pakistan.

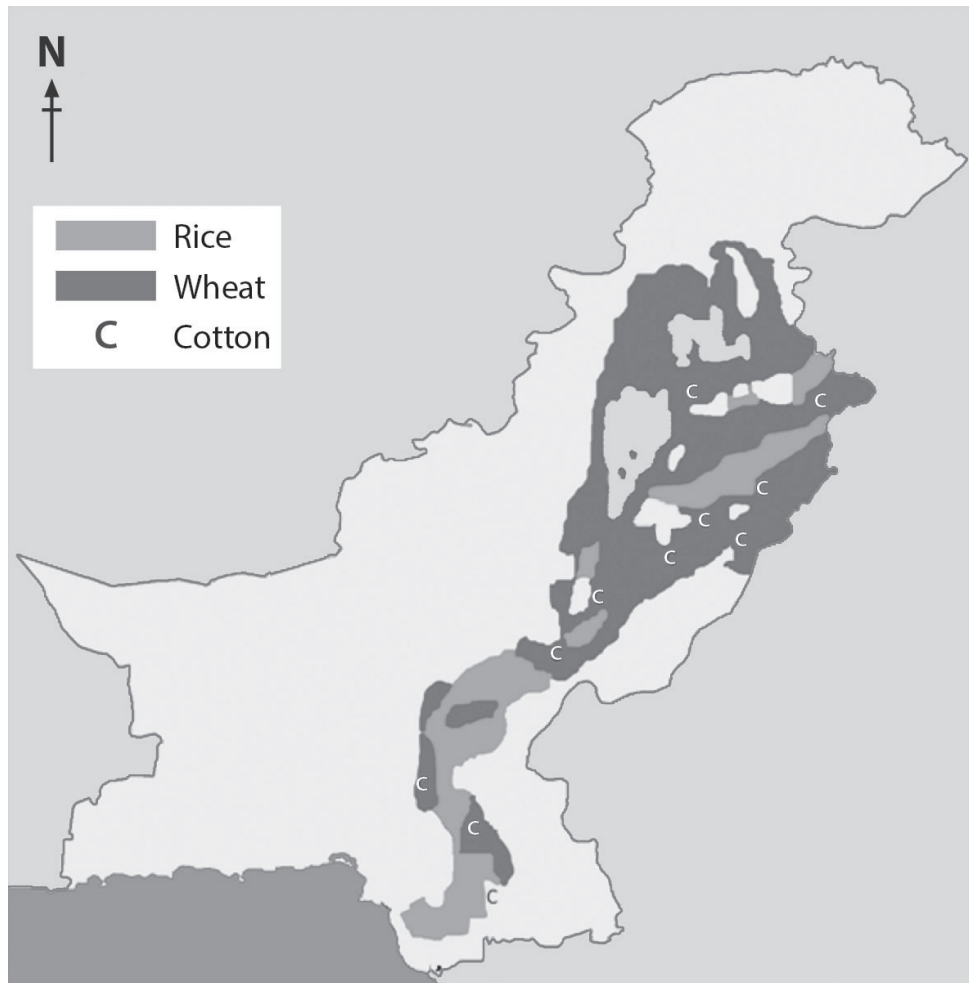


Figure 5(a)

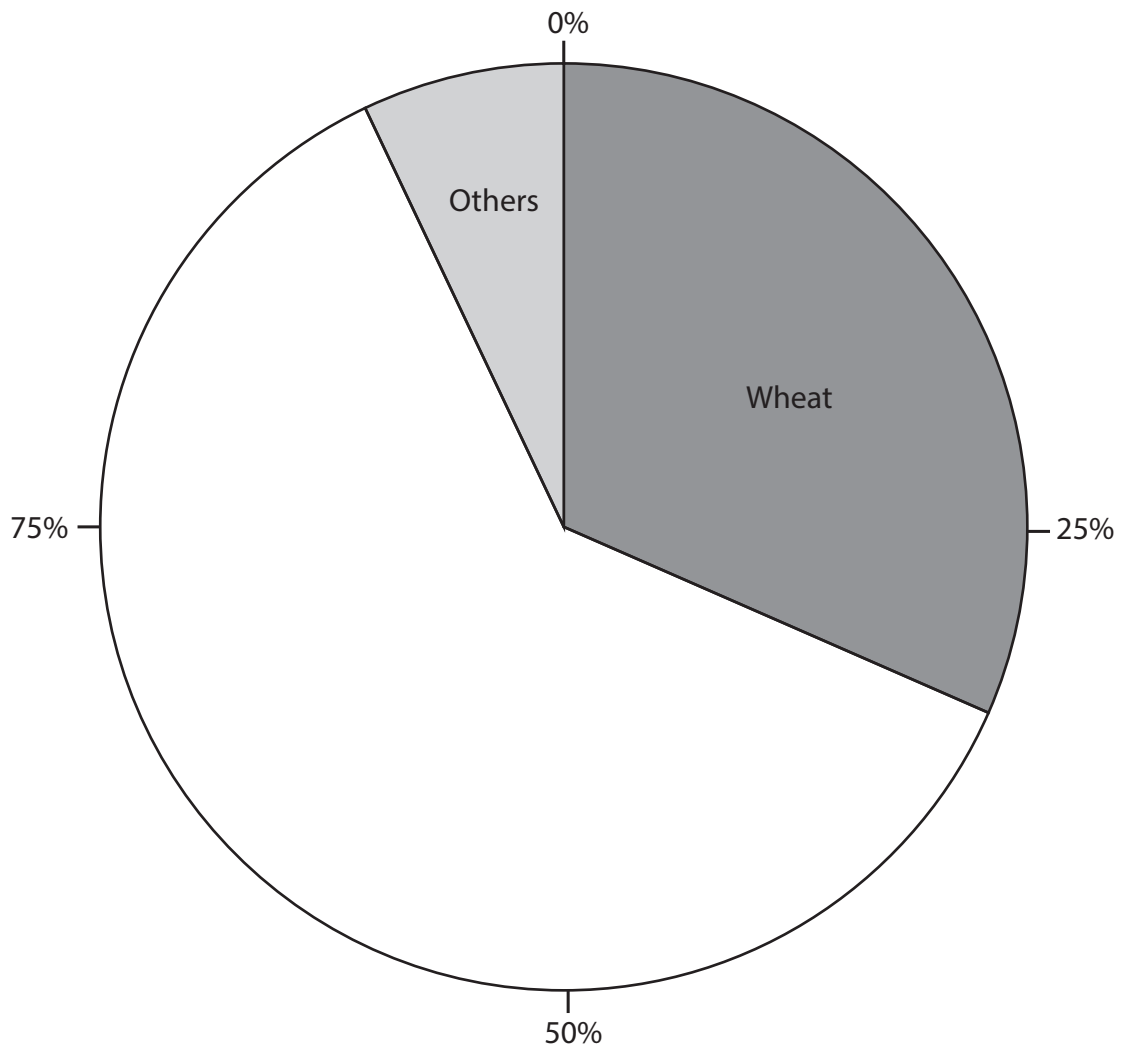
- (i) Name **one** province where rice is the most important crop.

(1)



(ii) Complete the pie chart below using the data in Figure 5(b).

(2)



Crop	Percentage of the total value of crop production in Pakistan
Wheat	30
Cotton	25
Sugar cane	20
Rice	20
Others	5

Figure 5(b)



(b) (i) Describe the distribution of cotton-growing areas shown in Figure 5(a).

(3)

.....

.....

.....

.....

.....

.....

(ii) Describe the agricultural methods used in the growing of cotton.

(4)

.....

.....

.....

.....

.....

.....

.....

.....

.....



If you answer Question 7 put a cross in the box .

7 (a) Study Figure 6 which shows the main rail network of Pakistan.

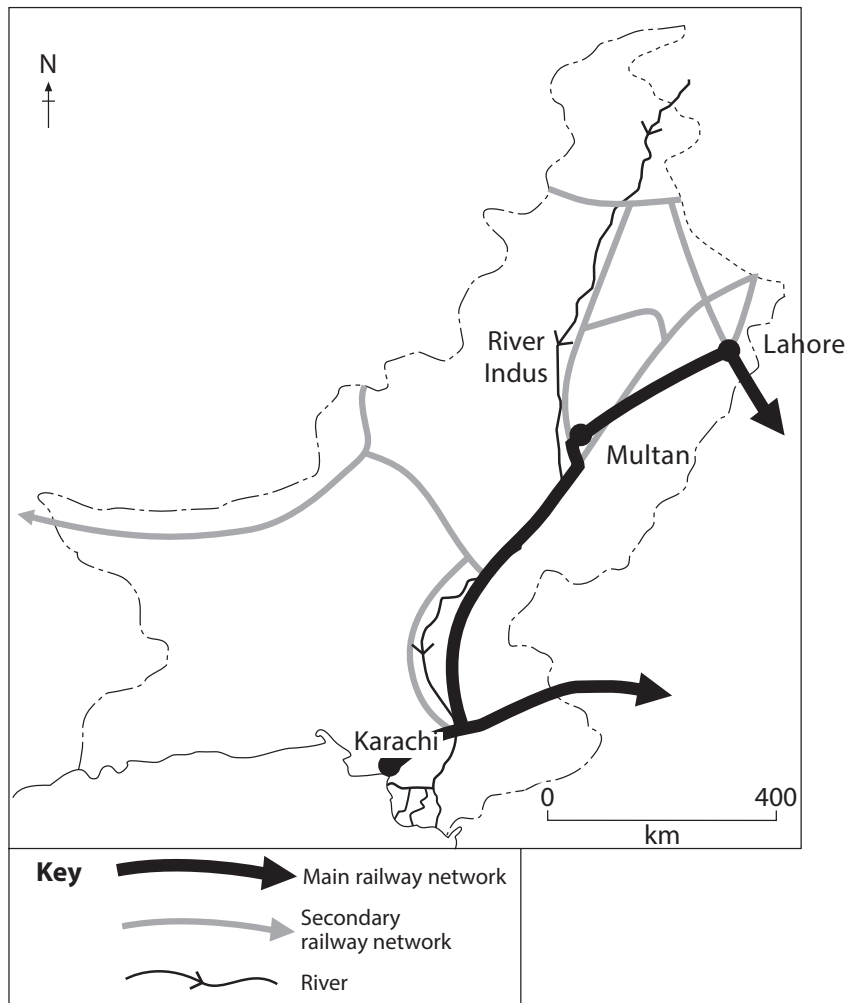


Figure 6

(i) State the most important use made of Pakistan's rail network.

(1)

(ii) Describe the distribution of the main rail network.

(2)



(iii) Suggest reasons why Pakistan's rail network is in need of improvement.

(3)

.....

.....

.....

.....

.....

.....

(iv) Describe the main factors, other than transport, influencing the location of manufacturing in Pakistan.

(4)

.....

.....

.....

.....

.....

.....

.....

.....

.....



(b) Explain how craft and cottage industries contribute to the economy of Pakistan.

(6)

A series of horizontal dotted lines provided for writing the answer to the question.

(Total for Question 7 = 16 marks)



If you answer Question 8 put a cross in the box .

8 (a) Study Figure 7(a) which shows some information about Pakistan's imports.

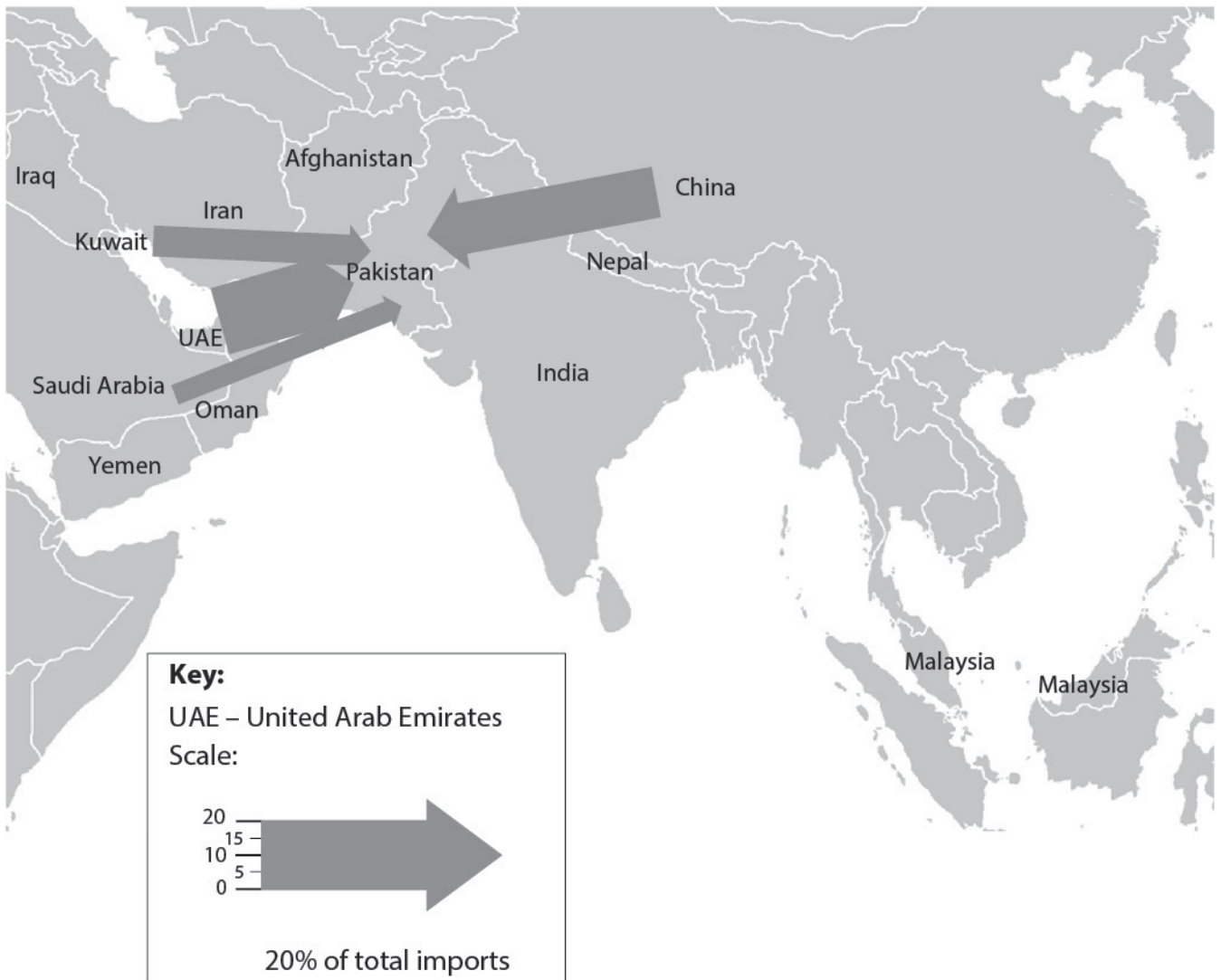


Figure 7(a)

(i) What percentage of Pakistan's imports come from China?

(1)

(ii) On Figure 7(a) above, construct a flow line to show imports from Malaysia. Use the information in Figure 7(b).

(2)

Country of origin	Percentage of total imports
Malaysia	6

Figure 7(b)



(iii) State the commodities being imported by Pakistan.

(3)

.....

.....

.....

.....

.....

.....

(iv) Explain why Pakistan has a trade deficit.

(4)

.....

.....

.....

.....

.....

.....

.....

.....

.....

.....



BLANK PAGE

