

Centre No.						Paper Reference						Surname	Initial(s)	
Candidate No.						4	4	0	0	/	1	F	Signature	

Paper Reference(s)

4400/1F

London Examinations IGCSE

Mathematics

Paper 1F

Foundation Tier

Monday 18 May 2009 – Afternoon

Time: 2 hours

Examiner's use only

--	--	--

Team Leader's use only

--	--	--

Materials required for examination

Ruler graduated in centimetres and millimetres, protractor, compasses, pen, HB pencil, eraser, calculator. Tracing paper may be used.

Items included with question papers

Nil

Instructions to Candidates

In the boxes above, write your centre number, candidate number, your surname, initials and signature. Check that you have the correct question paper. Answer ALL the questions. Write your answers in the spaces provided in this question paper. Without sufficient working, correct answers may be awarded no marks. **You must NOT write on the formulae page. Anything you write on the formulae page will gain NO credit.** If you need more space to complete your answer to any question, use additional answer sheets.

Information for Candidates

The marks for individual questions and the parts of questions are shown in round brackets: e.g. (2). There are 22 questions in this question paper. The total mark for this paper is 100. There are 20 pages in this question paper. Any blank pages are indicated. You may use a calculator.

Advice to Candidates

Write your answers neatly and in good English.

This publication may be reproduced only in accordance with Edexcel Limited copyright policy. ©2009 Edexcel Limited.

Printer's Log. No.
N34020A

W850/U4400/57570 4/4/6



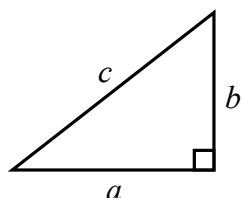
Turn over

edexcel
advancing learning, changing lives

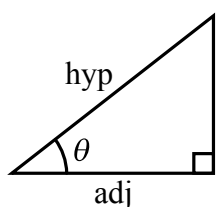
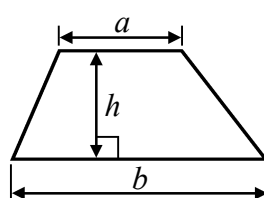
IGCSE MATHEMATICS 4400

FORMULA SHEET – FOUNDATION TIER

Pythagoras' Theorem
 $a^2 + b^2 = c^2$



Area of a trapezium = $\frac{1}{2}(a + b)h$



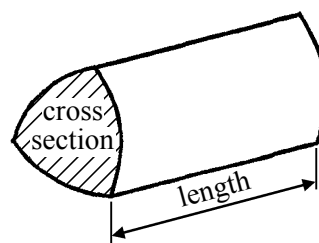
adj = hyp \times cos θ
 opp = hyp \times sin θ
 opp = adj \times tan θ

Volume of prism = area of cross section \times length

or $\sin \theta = \frac{\text{opp}}{\text{hyp}}$

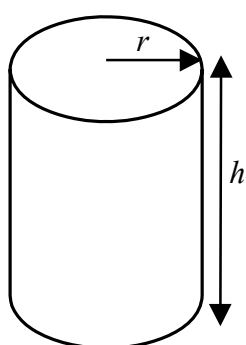
$\cos \theta = \frac{\text{adj}}{\text{hyp}}$

$\tan \theta = \frac{\text{opp}}{\text{adj}}$



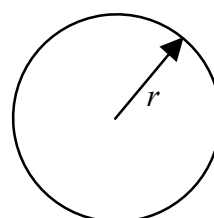
Circumference of circle = $2\pi r$

Area of circle = πr^2



Volume of cylinder = $\pi r^2 h$

Curved surface area of cylinder = $2\pi r h$



Leave
blank

Answer ALL TWENTY TWO questions.

Write your answers in the spaces provided.

You must write down all stages in your working.

1. (a) Write the number **six thousand and twelve** in figures.

.....
(1)

- (b) Write the number 6789 correct to the nearest hundred.

.....
(1)

- (c) Write down the value of the 8 in the number 6789

.....
(1)

- (d) Find the number which is exactly halfway between 742 and 864

.....
(1)

(Total 4 marks)

Q1

2. Here are the first five terms of a number sequence.

9 18 27 36 45

- (a) Write down the next two terms of the sequence.

.....,

(2)

- (b) Explain how you worked out your answer.

.....

(1)

- (c) Find the 20th term of the sequence.

.....
(1)

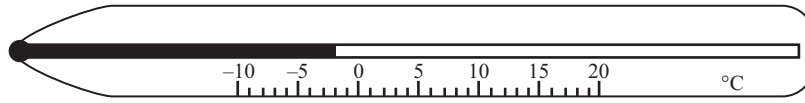

(Total 4 marks)

Q2



Leave blank

3. One evening, Jade recorded the time and the temperature.



(a) Write down the time using

(i) the 12-hour clock,

.....

(ii) the 24-hour clock.

.....

(2)

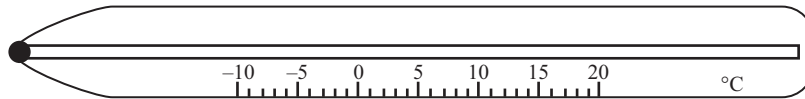
(b) Write down the temperature.

..... °C

(1)

Later in the night, the temperature was -8°C .

(c) Show -8°C on the thermometer below.



(1)

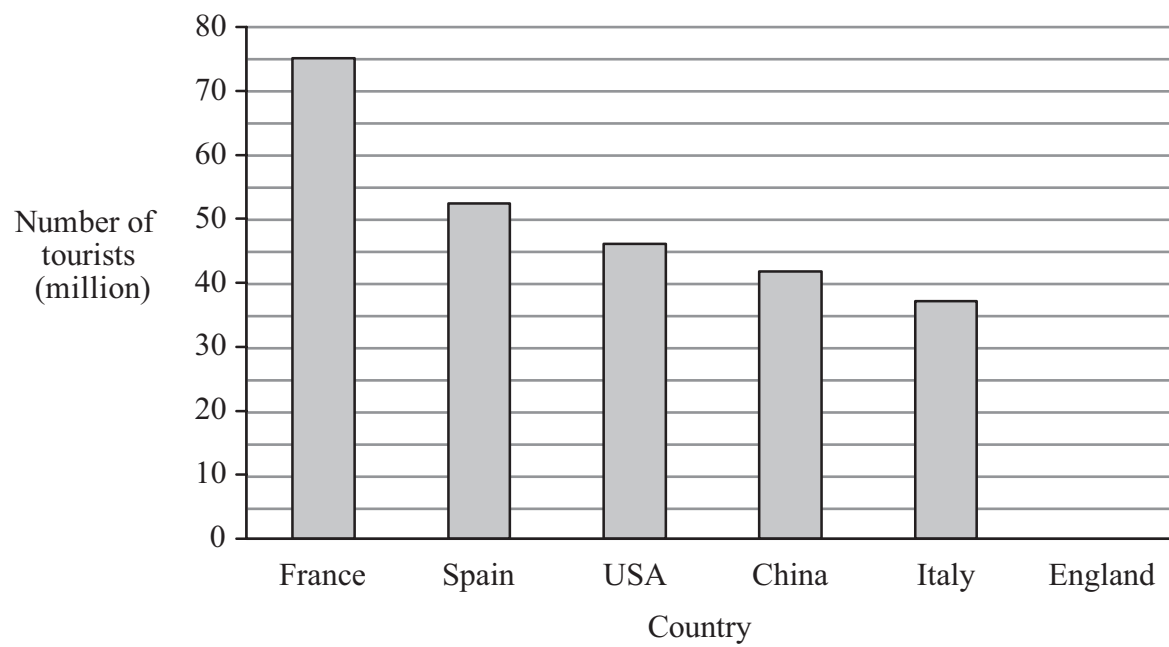
Q3

(Total 4 marks)



Leave
blank

4. The bar chart shows information about the numbers of tourists, in millions, who visited five countries in 2004.



- (a) Write down the number of tourists who visited France.

..... million
(1)

- (b) Which country was visited by 46 million tourists?

.....
(1)

In 2004, 28 million tourists visited England.

- (c) Draw a bar on the bar chart to show this information.

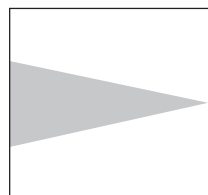
(1)

Q4


(Total 3 marks)




5. Here are 4 flags. Each flag is a square.




A



B



C



D

(a) (i) On flag A, draw the line of symmetry.

(ii) Write down the special name for the shaded triangle.

.....
(2)

(b) On flag B, draw **all** its lines of symmetry.

(2)

(c) On flag B, the shaded shape is an 8-sided polygon.

(i) Write down the special name for an 8-sided polygon.

.....

(ii) Explain why the shaded polygon is **not** a regular polygon.

.....
(2)

(d) (i) How many lines of symmetry has flag C?

.....

(ii) Write down the order of rotational symmetry of flag C.

.....
(2)

(e) (i) What fraction of flag D is white?

.....

(ii) Write your fraction as a decimal.

.....
(2)

(Total 10 marks)

Q5

--	--



Leave blank

6.

22	23	24	25	26
27	28	29	30	

(a) From the numbers in the box, write down

(i) two numbers with a sum of 46

..... and

(ii) a multiple of 7

.....

(iii) a square number,

.....

(iv) a prime number.

.....

(4)

(b) A number is taken at random from the numbers in the box.
Find the probability that it will be

(i) the number 22

.....

(ii) an even number.

.....

(3)

Q6

(Total 7 marks)



Leave
blank

7. (a) (i) Find $\sqrt{7}$

Write down all the figures on your calculator display.

.....

(ii) Write your answer to part (i) correct to 2 decimal places.

.....
(2)

(b) (i) Find 0.29^2

Write down all the figures on your calculator display.

.....

(ii) Write your answer to part (i) correct to 1 significant figure.

.....
(2)

(c) Find the value of $1.5^3 + \frac{1}{2.5}$

.....
(2)

(Total 6 marks)

Q7

8. Here is the number of points a driver scored in each of 10 motor races.

10 1 10 6 10 4 10 4 5 10

(a) Work out the median number of points.

.....
(2)

(b) Work out the range of the number of points.

.....
(2)

(Total 4 marks)

Q8



Leave
blank

9. (a) Simplify $q + q + q + q$

.....
(1)

(b) Simplify $n \times 5 \times p$

.....
(1)

(c) Solve $6x = 42$

$x =$
(1)

(d) Solve $8y - 1 = 5$

$y =$
(2)

(Total 5 marks)

Q9

10. (a) Write these fractions in order of size.
Start with the smallest fraction.

$$\frac{2}{3} \quad \frac{7}{10} \quad \frac{13}{20} \quad \frac{5}{8}$$

.....
(2)

(b) Show that $\frac{3}{4} - \frac{5}{12} = \frac{1}{3}$

(2)

(Total 4 marks)

Q10



Leave blank

11.

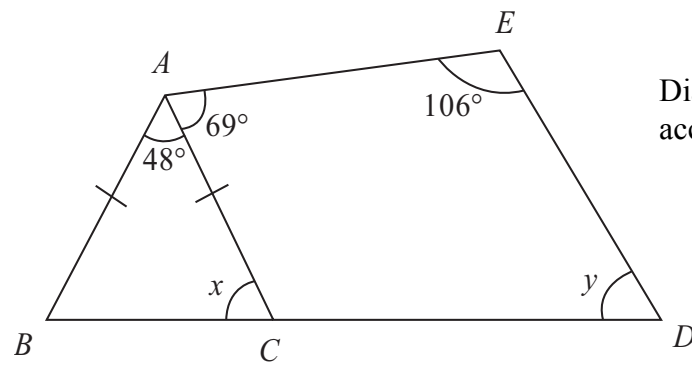


Diagram **NOT** accurately drawn

BCD is a straight line.
 $AB = AC$

(a) Work out the size of angle x .

.....
(2)

(b) Work out the size of angle y .

.....
(3)

(Total 5 marks)

Q11



Leave
blank

12. Last year in Mathstown High School, the ratio of the number of candidates for IGCSE mathematics to the number of candidates for IGCSE biology was 5 : 2
The number of candidates for IGCSE mathematics was 80

(a) Work out the number of candidates for IGCSE biology.

.....
(2)

The 80 mathematics candidates were divided between Foundation and Higher in the ratio 1 : 3

(b) Work out the number of Foundation candidates.

.....
(2)

(Total 4 marks)

Q12

13. Omar travelled from Nairobi to Mombasa by train.
The journey took 13 hours 15 minutes.
The average speed was 40 km/h.

Work out the distance from Nairobi to Mombasa.

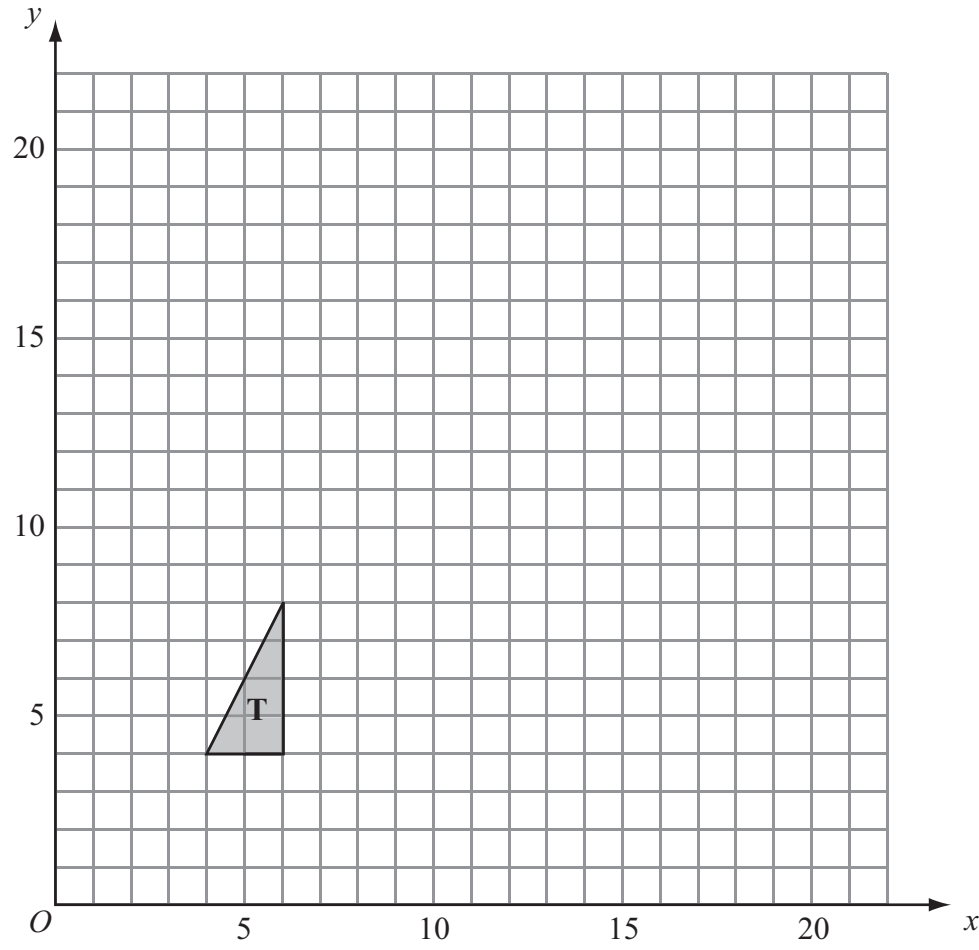
..... km

(Total 3 marks)

Q13



14.



On the grid, enlarge triangle **T** with a scale factor of $2\frac{1}{2}$ and centre $(0, 0)$.

(Total 3 marks)

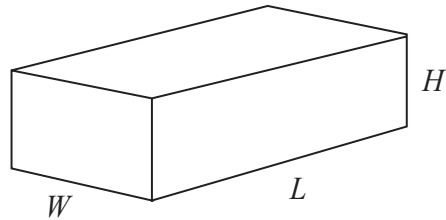
Leave
blank

Q14



Leave
blank

15. Here is a cuboid with length L , width W and height H .



The total surface area, A , of the cuboid is given by the formula

$$A = 2(LW + HW + HL)$$

- (a) $L = 12$ $W = 7$ $H = 5$
Work out the value of A .

$$A = \dots\dots\dots$$

(2)

- (b) $A = 70$ $W = 4$ $H = 2$
Work out the value of L .

$$L = \dots\dots\dots$$

(3)

(Total 5 marks)

Q15



Leave
blank

16. Shilpa's weekly pay is \$850
She spends 14% of the \$850 on food.

(a) Work out 14% of \$850

\$
(2)

Brett's weekly pay is \$760
He spends \$266 on rent.

(b) Express \$266 as a percentage of \$760

..... %
(2)

Kazia spends \$204 a week on rent.
\$204 is 30% of her weekly pay.

(c) Work out her weekly pay.

\$
(2)

Q16

(Total 6 marks)



Leave
blank

17. A bag contains 10 coloured beads.
Ella is going to take at random a bead from the bag.
She says, "The probability that I will take a red bead is 0.35"

Explain why Ella is wrong.
You must show working to justify your answer.

.....
.....
.....

(Total 2 marks)

Q17

18. (a) Factorise $p^2 + 7p$

.....
(2)

(b) Solve $4 - 5x = 2$

$x =$
(3)

(c) Simplify $t^3 \times t^6$

.....
(1)

(d) Expand and simplify $3(4y + 5) - 5(2y + 3)$

.....
(2)

(Total 8 marks)

Q18



Leave
blank

19. The table shows information about the distances walked in a week by 40 people.

Distance (d km)	Frequency
$0 < d \leq 20$	8
$20 < d \leq 40$	24
$40 < d \leq 60$	5
$60 < d \leq 80$	2
$80 < d \leq 100$	1

Work out an estimate for the mean distance walked in a week by the 40 people.

..... km
(Total 4 marks)

Q19



Leave blank

20.

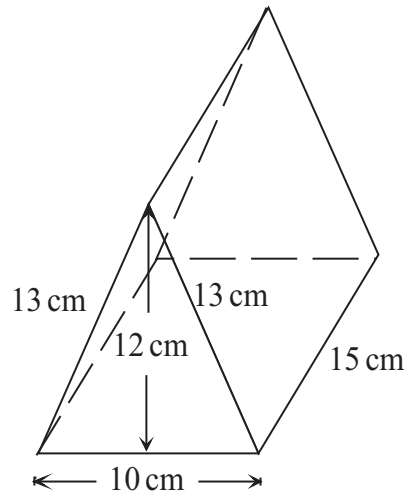


Diagram **NOT** accurately drawn

The diagram shows a prism.
The base of the prism is horizontal.
The cross-section of the prism is an isosceles triangle with sides of length 13 cm, 13 cm and 10 cm.
The vertical height of the triangle is 12 cm.
The length of the prism is 15 cm.

Work out the total surface area of the prism.

..... cm²

Q20

(Total 3 marks)



Leave blank

21. $\mathcal{E} = \{\text{positive whole numbers}\}$
 $A = \{\text{factors of } 27\}$
 $B = \{\text{factors of } 9\}$
 $C = \{\text{first four even numbers}\}$

(a) List the members of $A \cup B$.

.....
(2)

(b) (i) Is it true that $A \cap C = \emptyset$?

Tick (✓) the appropriate box.

Yes

No

(ii) Explain your answer.

.....
.....
(1)

Q21

(Total 3 marks)

22.

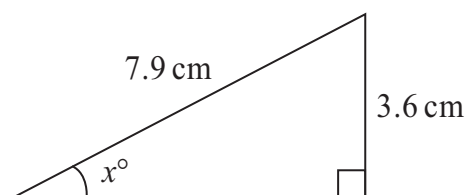


Diagram NOT accurately drawn

Work out the value of x .
Give your answer correct to 1 decimal place.

$x = \dots\dots\dots$

Q22

(Total 3 marks)

TOTAL FOR PAPER: 100 MARKS

END



BLANK PAGE



BLANK PAGE

