

BLANK PAGE



Leave blank

Answer ALL the questions. Write your answers in the spaces provided.

1. The table lists the names of different structures found within a human.

Complete the table by numbering each structure in order of its size.
Use number 1 for the smallest structure through to number 4 for the largest.

Name of structure	Order of size
brain	
nucleus	
nervous system	
nerve cell	

Q1

(Total 3 marks)

2. Explain how sewage pollution can affect the plants and animals in a river.

.....

.....

.....

.....

.....

.....

.....

.....

.....

.....

.....

.....

.....

.....

.....

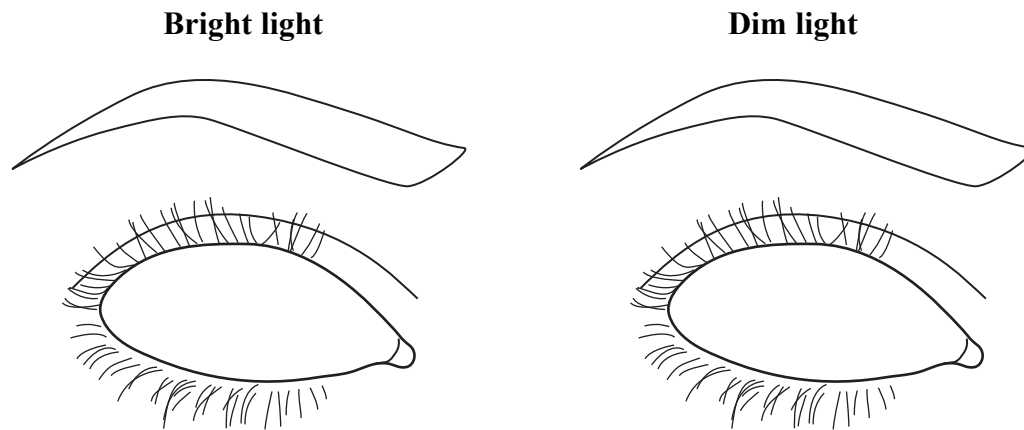
Q2

(Total 5 marks)



3. The iris of the eye helps the pupil to change as a person moves from an area of bright light to an area of dim light.

(a) (i) Draw and label the iris and the pupil in each eye below to show how they would appear in bright and dim light.



(3)

(ii) Explain how the iris produces this change in appearance in the pupil.

.....
.....
.....
.....

(2)

(iii) Explain why it is important to change the appearance of the pupil when moving from bright light into dim light.

.....
.....
.....
.....

(2)





<p>(b) Changes in the eye also take place to help focus on near objects. Describe these changes.</p> <p>.....</p> <p>.....</p> <p>.....</p> <p>.....</p> <p>.....</p> <p style="text-align: right;">(3)</p> <p style="text-align: right;">(Total 10 marks)</p>	Leave blank
	Q3



N 3 7 7 5 6 A 0 5 3 2




BLANK PAGE



Leave
blank

4. The diagram shows a normal red blood cell.



(a) Describe **two** ways in which the structure of a normal red blood cell helps it to absorb and transport oxygen.

1

.....

2

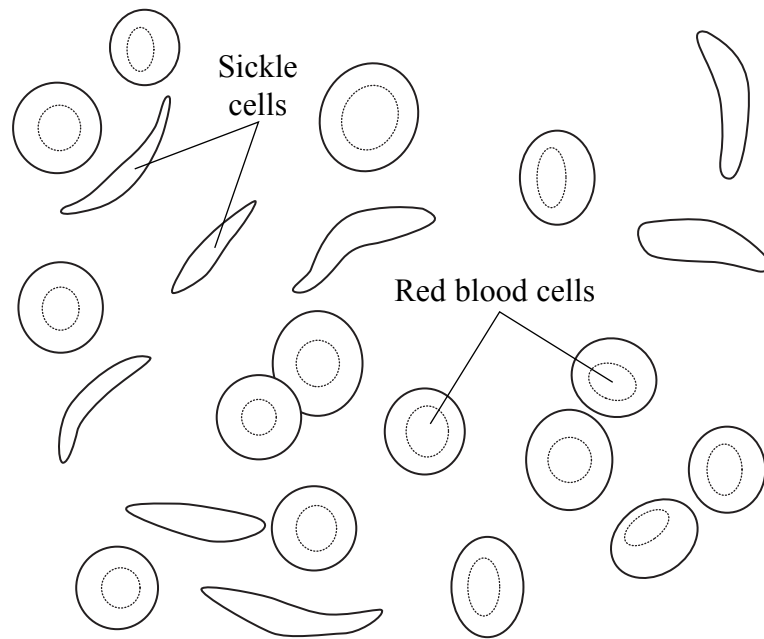
.....

(2)



(b) Sickle cell anaemia is an inherited condition that affects the shape of red blood cells. It is caused by a recessive allele, **n**, which causes the cells to buckle and look sickle-shaped. The dominant allele, **N**, allows red blood cells to develop normally.

The diagram shows normal red blood cells and sickle-shaped red blood cells.



(i) What is an allele?

..... (1)



Leave
blank

(ii) Two parents know they are both heterozygous for sickle cell anaemia.

Complete the genetic diagram below to show the genotypes of the parents, their gametes and their possible offspring.
Use the letter **N** for the dominant allele and the letter **n** for the recessive allele.

Parent genotypes

Gamete genotypes

Possible offspring genotypes

(3)

(iii) What are the phenotypes of the possible offspring?

.....

(1)

Q4

(Total 7 marks)

9

Turn over



N 3 7 7 5 6 A 0 9 3 2

Leave blank

5. Mitosis and meiosis are two ways by which cells may divide.

(a) Complete the statements in the table about mitosis and meiosis by writing a number in each empty box.

Statement to complete	Mitosis	Meiosis
Starting with one cell, the number of cells produced will be		
If the parent cell has 46 chromosomes, each daughter cell will have		

(4)

(b) Mitosis occurs during growth.

Name **two** other processes that involve mitosis.

1

2

(2)

(c) Choose **two** words from the list that describe cells produced by meiosis.

diploid gametes haploid homozygous identical

1

2

(2)

Q5

(Total 8 marks)



Leave
blank

6. The heart rate of an athlete was measured every ten minutes for one hour during a training session.

The results are shown in the table.

Time in minutes	0	10	20	30	40	50	60
Heart rate in beats per minute	66	77	88	100	112	114	113

- (a) Describe how heart rate changes during the training session.

.....
.....
.....
.....

(2)

- (b) Explain the change in the results from 0 minutes to 40 minutes.

.....
.....
.....
.....
.....
.....
.....
.....
.....

(4)

(Total 6 marks)

Q6



BLANK PAGE



Leave
blank

7. The passage describes the way in which alcohol is made by a fungus during the production of beer.

Write on the dotted lines the most suitable word or words to complete the passage.

Most fungi are made from thread-like structures called

and have made of chitin. They also have lots of the

organelle called a in their cytoplasm. The fungus

used to make beer is single-celled and is called

This fungus uses a process called respiration to

convert a sugar called into ethanol and a gas

called

Q7

(Total 7 marks)

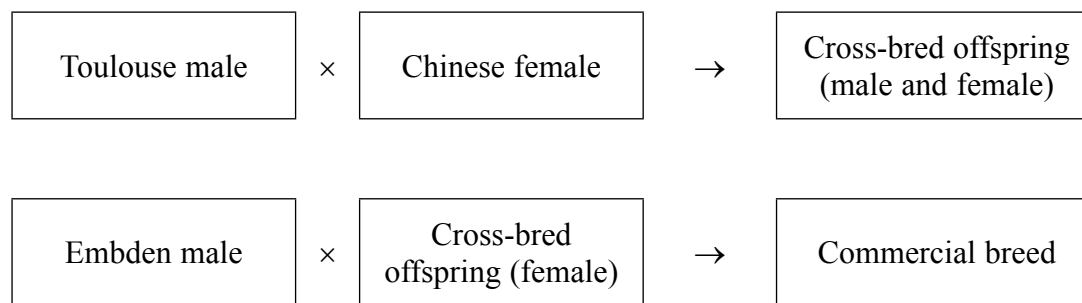


8. The photograph shows a bird called a goose.



Two breeds of goose called Toulouse and Embden grow quickly. However, both breeds lay very few eggs. Another breed of goose called Chinese lays lots of eggs but grows slowly.

Farmers have used a breeding process to produce a commercial breed of goose from these three different breeds. The diagram below shows the breeding process.



(a) Name the **two** desired characteristics farmers wanted to obtain with the commercial breed of goose.

1

2

(2)





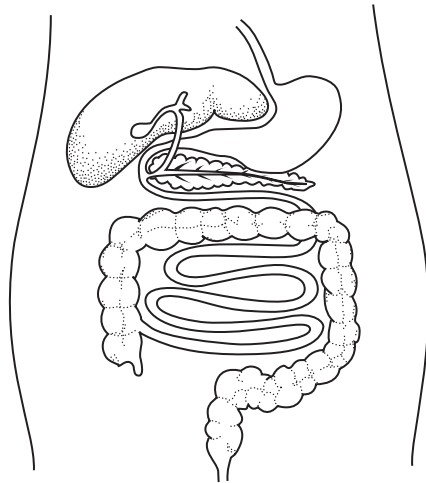
<p>(b) Use the information opposite to suggest one difference in the characteristics of the cross-bred female and the Chinese female.</p> <p>.....</p> <p>.....</p> <p style="text-align: right;">(1)</p> <p>(c) The breeding process involves farmers choosing which birds breed with each other.</p> <p>What name describes a breeding process in which humans choose which animals breed together?</p> <p>.....</p> <p style="text-align: right;">(1)</p> <p style="text-align: right;">(Total 4 marks)</p>	<p>Leave blank</p> <p>Q8</p> <div style="border: 1px solid black; width: 20px; height: 20px; margin: 0 auto;"></div>
Empty space for student response	Empty space for marking



N 3 7 7 5 6 A 0 1 5 3 2



9. The diagram shows part of the human digestive system and some other organs.



- (a) (i) Using the letter **P** and a guideline, mark on the diagram the pancreas. **(1)**
- (ii) Using the letter **S** and a guideline, mark on the diagram the small intestine. **(1)**
- (b) The pancreas secretes enzymes that digest large molecules into smaller molecules.

Complete the table to show the missing large molecule, smaller molecule and enzymes.

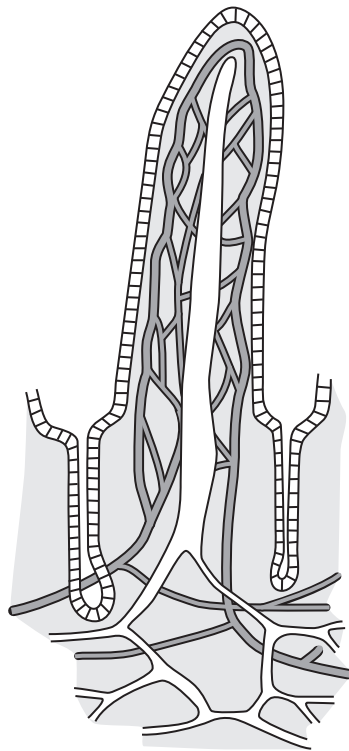
Large molecule	Smaller molecule	Enzyme
protein		
	fatty acids and glycerol	
starch	maltose	

(5)



Leave blank

(c) The diagram shows a villus.



Explain how the structure of a villus helps it perform its function.

.....

.....

.....

.....

.....

.....

.....

.....

.....

.....

.....


(5)

Q9

(Total 12 marks)



10. The photograph shows the reproductive structures of a flower called a lily.



(a) (i) Which number labels an anther?

..... (1)

(ii) What is the function of the anther?

..... (1)

(iii) Using the information in the photograph, suggest why this flower does not pollinate itself.

.....
..... (1)



Leave
blank

(b) Lilies can be cloned and then mass produced using micropropagation.

(i) What does the term **cloned** mean?

.....
.....

(2)

(ii) Complete the following passage about micropropagation. Write the most suitable word on the dotted lines.

Micropropagation is sometimes known as tissue

Small pieces of plants called are grown on nutrient

jelly. All procedures must be carried out under

conditions to make sure that there are no fungi or

present. The small pieces of plants grow because the cells

..... and then develop into new plants.

(5)

Q10

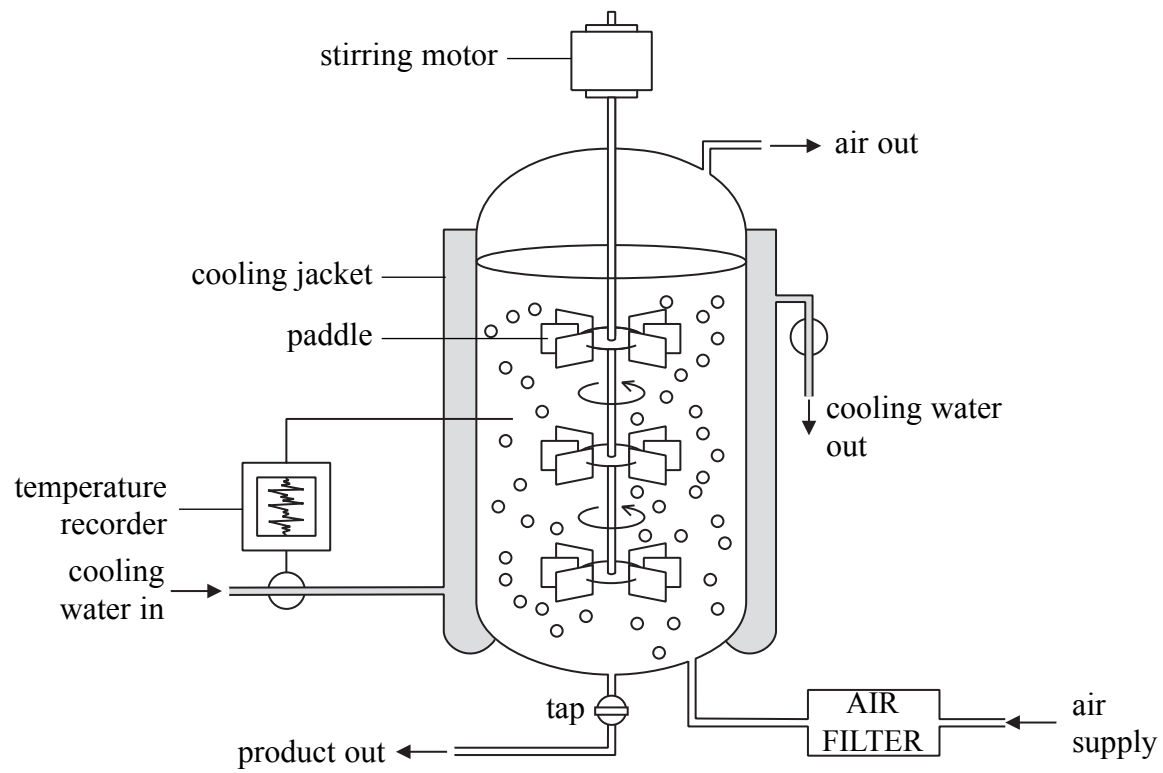
(Total 10 marks)

--	--



11. The antibiotic penicillin can be made in an industrial fermenter called a bioreactor. Penicillin is produced by a fungus which is grown in large quantities in a bioreactor.

A diagram of a bioreactor is shown below.



(a) Describe the function of the paddles in the bioreactor.

.....
.....
.....
.....

(2)

(b) Air is pumped into the bioreactor. Explain how this helps the growth of the fungus.

.....
.....
.....
.....

(2)



Leave
blank

(c) Explain how the temperature is kept constant in the bioreactor.

.....
.....
.....
.....

(2)

(d) Explain why it is important that the pH in the bioreactor remains constant.

.....
.....
.....
.....

(2)

Q11

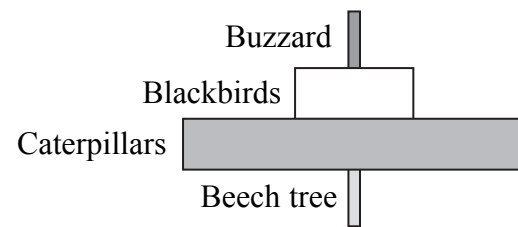
(Total 8 marks)



BLANK PAGE



12. (a) The diagram shows the pyramid of numbers for a food chain found in a wood.



(i) Name the secondary consumer in this food chain.

..... (1)

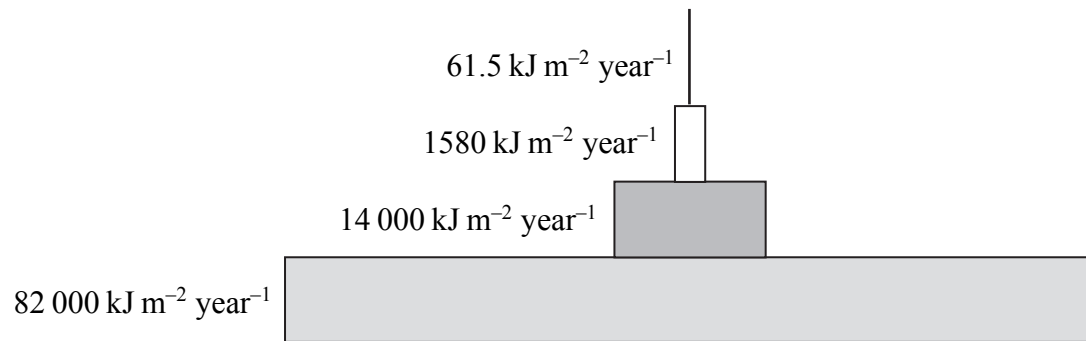
(ii) Sketch a labelled pyramid of biomass for this food chain.

(3)



(b) Pyramids of energy show the rate of energy flow at successive trophic levels in a given area over a fixed period of time.

The diagram below shows a pyramid of energy.



(i) Calculate the percentage of energy transferred from the producer trophic level to the tertiary consumer trophic level.

Answer.....%
(2)

(ii) Explain why so little energy is transferred from one trophic level to the next.

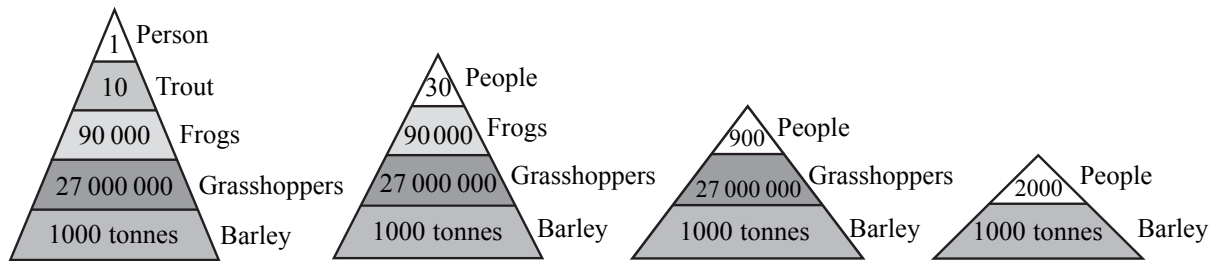
.....
.....
.....
.....
.....
.....

(3)



Leave blank

(c) The diagram below shows the different numbers of humans that can be supported in food chains of different lengths.



(i) How many more humans can be supported on a diet of barley compared to a diet of trout?

.....
(1)

(ii) What is the relationship between the length of a food chain and the number of people who can be supported by it? Explain your answer.

.....
.....
.....
.....
(2)

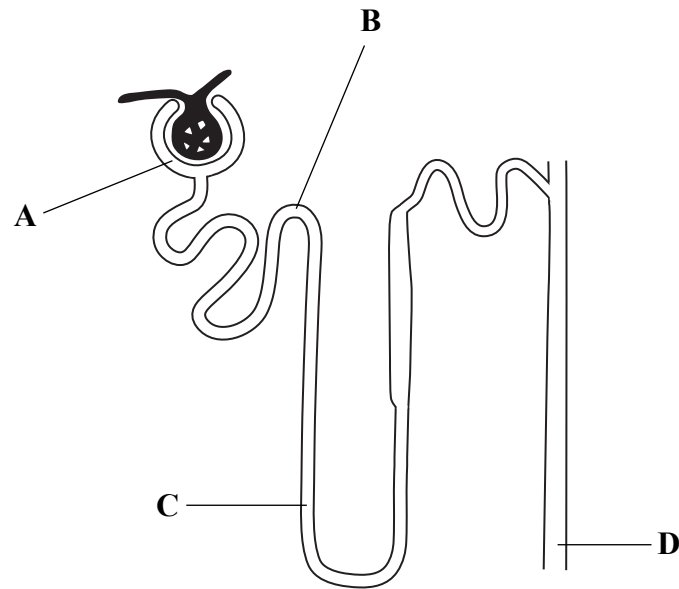
(Total 12 marks)

Q12

--	--



13. The diagram shows a nephron from a human kidney.



(a) Identify the parts of the nephron labelled **A**, **B**, **C** and **D**.

A

B

C

D

(4)

(b) In which part, **A**, **B**, **C** or **D**, does each of the following occur?

(i) Ultrafiltration

(ii) Reabsorption of glucose

(iii) Increased permeability to water in response to ADH

(3)



Leave blank

(c) The table shows the amount of some substances (in arbitrary units) filtered, excreted and reabsorbed by the kidneys in a day.

Substance	Filtered	Excreted	Reabsorbed
water	180	1.50	178.5
glucose	800	0	800
urea	56	28	28

(i) Calculate the percentage of filtered urea that is reabsorbed.

Answer %
(2)

(ii) Suggest why it is important to excrete urea.

.....
.....
(1)

(iii) Suggest why it is important that all the glucose is reabsorbed.

.....
.....
(1)

(iv) Use the information in the table to name the process by which glucose is reabsorbed.
Give a reason for your answer.

.....
.....
.....
.....
(2)

(Total 13 marks)

Q13

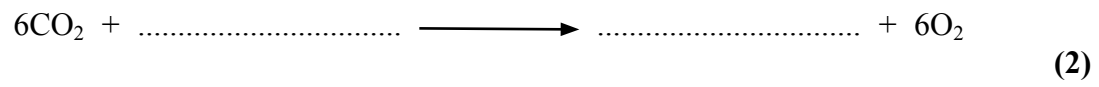
--	--



Leave blank

14. Green plants carry out the processes of photosynthesis and respiration.

(a) Complete the balanced chemical symbol equation for photosynthesis.



(b) Identify **two** environmental factors that can affect the rate of movement of carbon dioxide into the palisade cells of a plant.

- 1
- 2 (2)

(c) Describe and explain how the net exchange of carbon dioxide in a green plant is different during the day compared to the night.

.....
.....
.....
.....
.....
.....
.....
.....

(4)

Q14

(Total 8 marks)



Leave blank

15. Human body temperature is 37°C. When a person is in a hot environment where the air temperature is much higher than 37°C, changes take place to make sure that their body temperature remains at 37°C.

(a) Explain **two** changes that take place in the body to keep its temperature at 37°C in a hot environment.

1

.....

.....

2

.....

.....

(4)

(b) Maintaining a constant body temperature is an example of homeostasis.

Give **two** other examples of homeostasis in the human body.

1

2

(2)

(c) Homeostasis involves negative feedback.

With reference to body temperature, describe what is meant by the term **negative feedback**.

.....

.....

(1)

Q15

(Total 7 marks)

TOTAL FOR PAPER: 120 MARKS

END



BLANK PAGE



BLANK PAGE



BLANK PAGE

