

**Paper Reference(s) 5BI1H/01**

**Edexcel GCSE**

**Biology/Science**

**Unit B1: Influences on Life**

**Higher Tier**

**Tuesday 15 May 2012 – Morning**

**Time: 1 hour plus your additional time allowance**

**INSTRUCTIONS TO CANDIDATES**

**Write your centre number, candidate number, surname, initials and your signature in the boxes below. Check that you have the correct question paper.**

<b>Centre No.</b>							
<b>Candidate No.</b>							
<b>Surname</b>							
<b>Initial(s)</b>							
<b>Signature</b>							
<b>Paper Reference</b>	<b>5</b>	<b>B</b>	<b>I</b>	<b>1</b>	<b>H</b>	<b>/</b>	<b>0 1</b>

Use **BLACK** ink or ball-point pen.

Answer **ALL** questions.

Answer the questions in the spaces provided – there may be more space than you need.

## **MATERIALS REQUIRED FOR EXAMINATION**

Calculator, ruler

## **ITEMS INCLUDED WITH QUESTION PAPERS**

Nil

## **INFORMATION FOR CANDIDATES**

- The total mark for this paper is 60.
- The marks for **EACH** question are shown in brackets – use this as a guide as to how much time to spend on each question.
- Questions labelled with an **ASTERISK (\*)** are ones where the quality of your written communication will be assessed – you should take particular care with your spelling, punctuation and grammar, as well as the clarity of expression, on these questions.

## **ADVICE TO CANDIDATES**

- Read each question carefully before you start to answer it.
- Keep an eye on the time.
- Try to answer every question.
- Check your answers if you have time at the end.

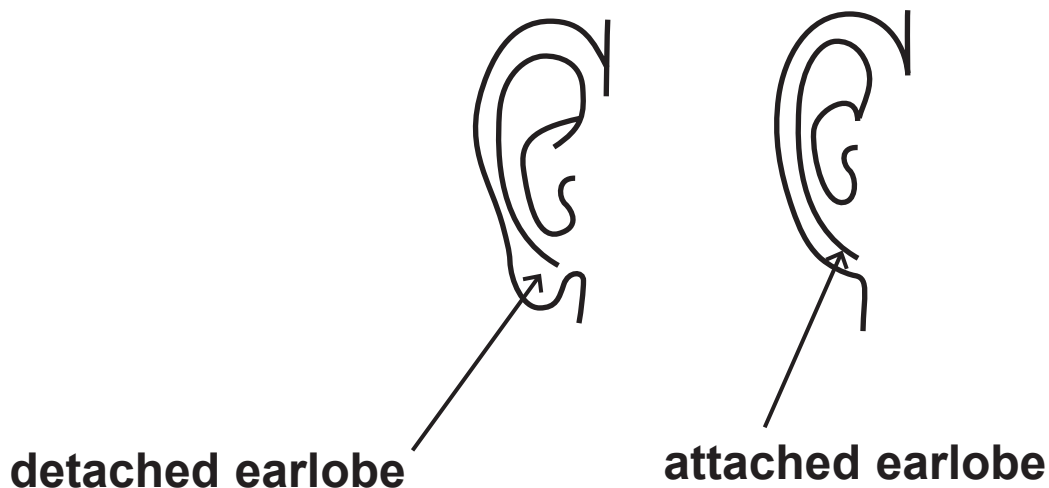
(Turn over)

Answer ALL questions.

Some questions must be answered with a cross in a box . If you change your mind about an answer, put a line through the box  and then mark your new answer with a cross .

## INHERITANCE

- 1 (a) The earlobes of an individual are detached or attached. This is determined by the alleles inherited from their parents.



An individual with attached earlobes must have inherited two recessive alleles from each of their parents and will have the genotype  $ee$ .

- (i) State the genetic term used to describe an individual with the genotype  $ee$  for attached earlobes. (1 mark)

- (ii) A female with the genotype  $ee$  has attached earlobes and a male with the genotype  $Ee$  has detached earlobes.

Complete the Punnett square to show the gametes and genotypes of the offspring for this female and male. (2 marks)

		female gametes	
male gametes			

- (iii) State the probability of the offspring having detached earlobes. (1 mark)

---

(Question continues on next page)

(Turn over)

(iv) What is the percentage probability of a homozygous dominant mother and homozygous recessive father producing a child with attached earlobes?

Put a cross (☒) in the box next to your answer.  
(1 mark)

A      0%

B      25%

C      75%

D      100%

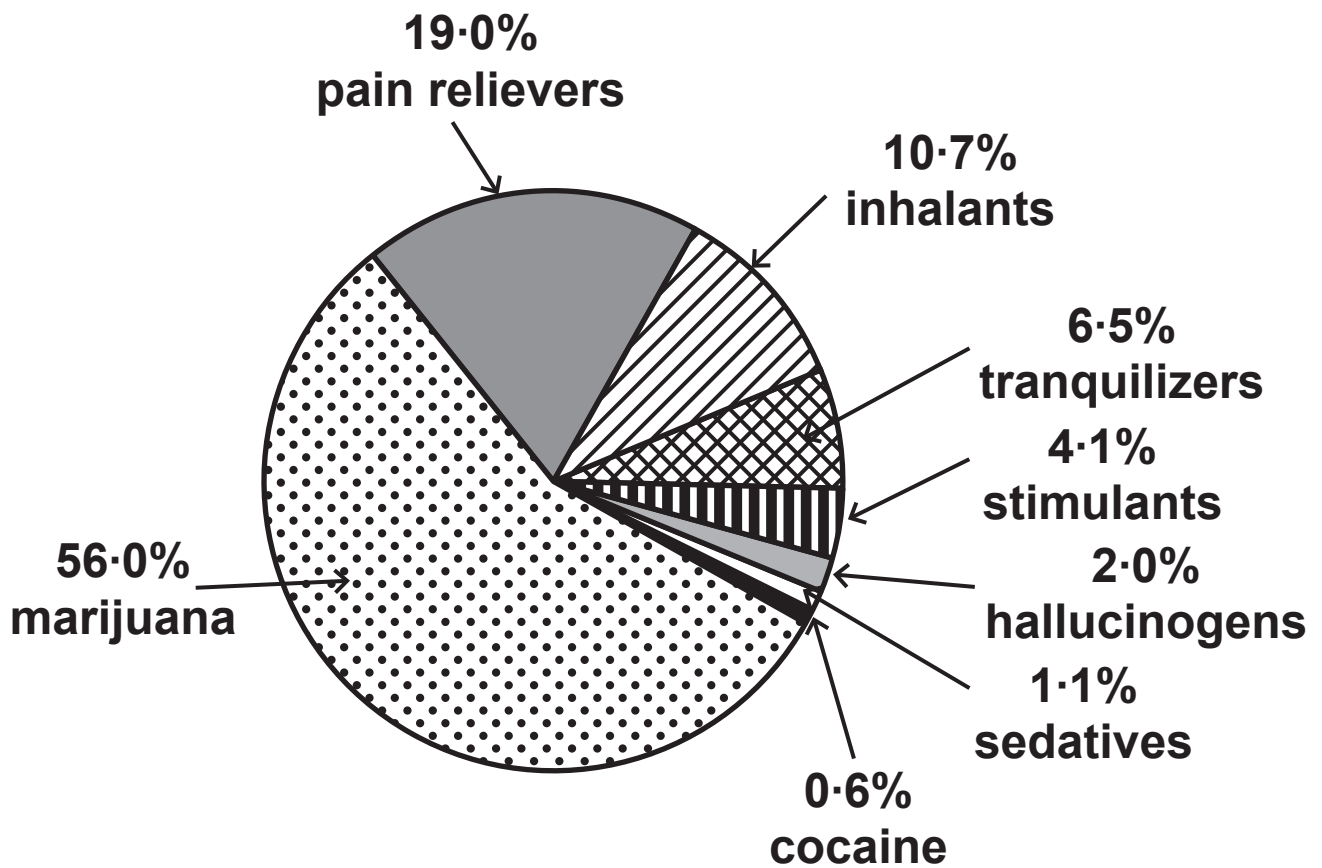
(Question continues on next page)



## DRUGS

- 2 In the USA, 2.7 million people admitted using illegal drugs.

The pie chart shows the percentage of these people using different illegal drugs.



(Question continues on next page)

(Turn over)

- (a) (i) Calculate the number of people who admitted using marijuana illegally. (2 marks)

answer = \_\_\_\_\_ million people

- (ii) Suggest ONE reason why the information in the pie chart may not be reliable. (1 mark)

---

---

---

(Question continues on next page)

(Turn over)



**(b) Marijuana is often smoked with tobacco.**

**Suggest why combining tobacco with marijuana makes it more difficult to give up smoking marijuana. (2 marks)**

---

---

---

---

---

---

---

**(c) (i) Which of these drugs is a stimulant?**

**Put a cross (☒) in the box next to your answer.  
(1 mark)**

- A alcohol
- B caffeine
- C LSD
- D morphine

**(ii) Explain how stimulants affect reaction times.  
(2 marks)**

---

---

---

---

---

---

---

---

**(Total 8 marks)** **Q2**

**(Questions continue on next page)**

**BLOOD GLUCOSE**

- 3 Humans regulate the glucose concentration of their blood.**

**A scientist recorded the blood glucose concentration of an individual over a seven-hour period.**

**The results are shown in the table.**

<b>TIME OF DAY</b>	<b>BLOOD GLUCOSE CONCENTRATION / mg PER 100 cm<sup>3</sup></b>
<b>06.00</b>	<b>76</b>
<b>07.00</b>	<b>77</b>
<b>08.00</b>	<b>124</b>
<b>09.00</b>	<b>91</b>
<b>10.00</b>	<b>83</b>
<b>11.00</b>	<b>81</b>
<b>12.00</b>	<b>79</b>
<b>13.00</b>	<b>130</b>

**(Question continues on next page)**

**(Turn over)**

- (a) (i) Describe the trend in blood glucose concentration for this seven-hour period. (2 marks)**

---

---

---

---

---

---

---

---

- (ii) Suggest reasons for the changes in blood glucose concentration. (2 marks)**

---

---

---

---

---

---

---

---

(iii) Complete the sentence by putting a cross (☒) in the box next to your answer.

**Excess blood glucose is converted into**

**(1 mark)**

- A glucagon in the liver
- B glucagon in the pancreas
- C glycogen in the liver
- D glycogen in the pancreas

**(Question continues on next page)**

- (b) (i) Scientists have discovered that a high body mass index (BMI) is a risk factor that may cause Type 2 diabetes.

Calculate the BMI for a female who has a mass of 67.5 kg and a height of 1.50 m. (2 marks)

$$\text{BMI} = \frac{\text{mass in kg}}{(\text{height in metres})^2}$$

answer = \_\_\_\_\_

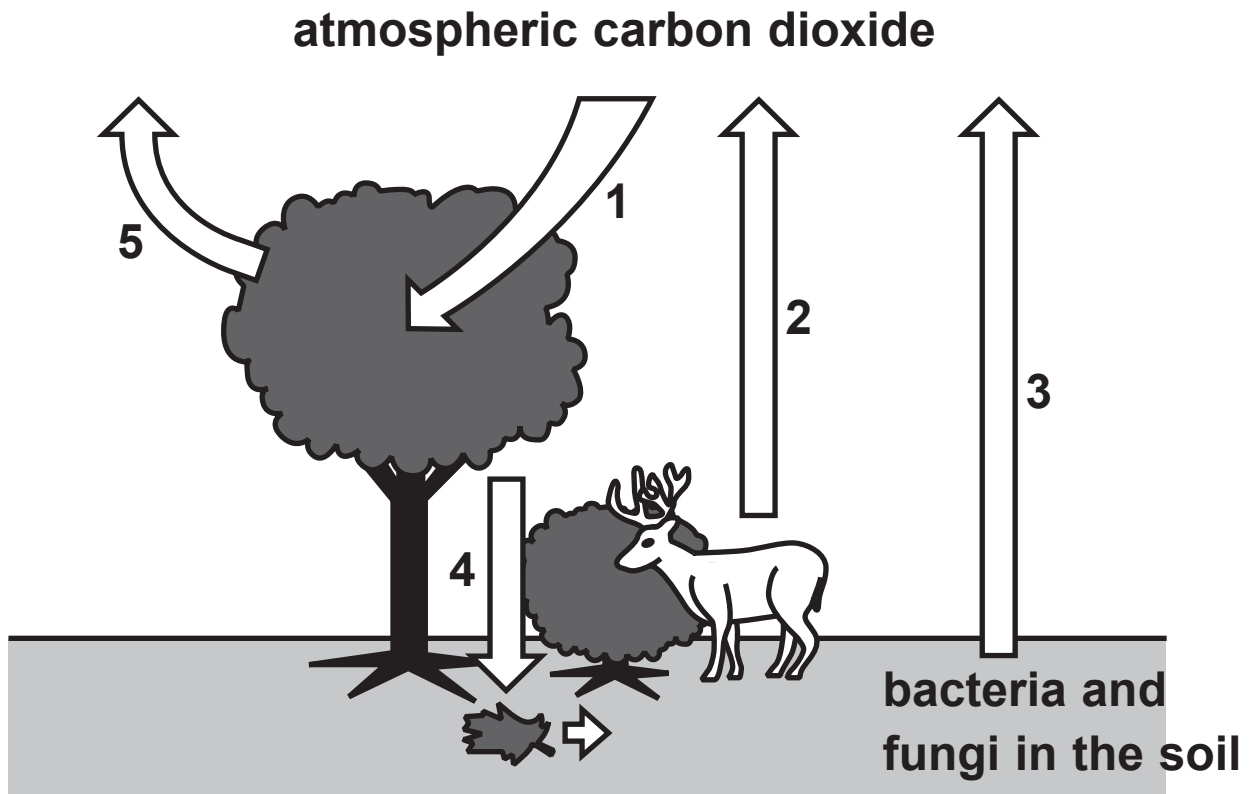
(Question continues on next page)

(Turn over)



## ENVIRONMENT CYCLING

- 4 (a) The diagram shows the processes involved in the carbon cycle. Each process is numbered.



- (i) What is the name of process 1?

Put a cross (☒) in the box next to your answer.  
(1 mark)

- A decomposition
- B denitrification
- C photosynthesis
- D respiration



- (ii) Describe the numbered processes that return carbon dioxide back into the atmosphere.  
(3 marks)

---

---

---

---

---

---

---

---

---

---

---

(Question continues on next page)

**(b) The human population is increasing.**

**Explain how this could change the concentration of carbon dioxide in the atmosphere. (2 marks)**

---

---

---

---

---

---

---

---

**(c) Air quality can be monitored using indicator species.**

**Name an indicator species used to monitor air quality. (1 mark)**

---

---

**(Question continues on next page)**

**(Turn over)**



**TEMPERATURE REGULATION**

- 5 (a) (i) Conditions in the human body must be regulated to maintain a stable internal environment.

Name the process that maintains a stable internal environment. (1 mark)

---

---

- (ii) Complete the sentence by putting a cross (☒) in the box next to your answer.

The temperature that enzymes work most effectively in the human body is

(1 mark)

A 31 °C

B 33 °C

C 35 °C

D 37 °C

(Question continues on next page)

(Turn over)





---

---

---

---

---

---

---

---

**Q5**

**(Total 12 marks)**

--	--

**(Questions continue on next page)**

**(Turn over)**

**CONTROLLING INFECTIONS**

**6 (a) Athlete's foot fungus is a pathogen.**

**(i) Describe how athlete's foot fungus is spread.  
(1 mark)**

---

---

---

**(ii) State the type of medication that can be used  
to treat this pathogen. (1 mark)**

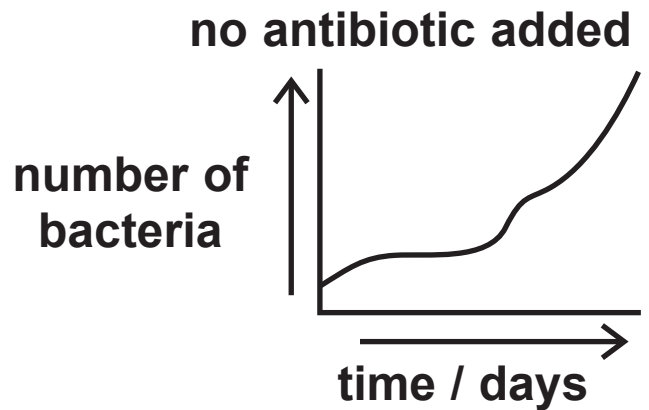
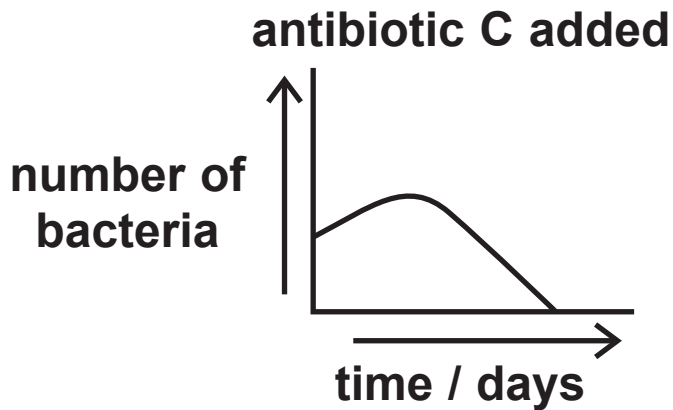
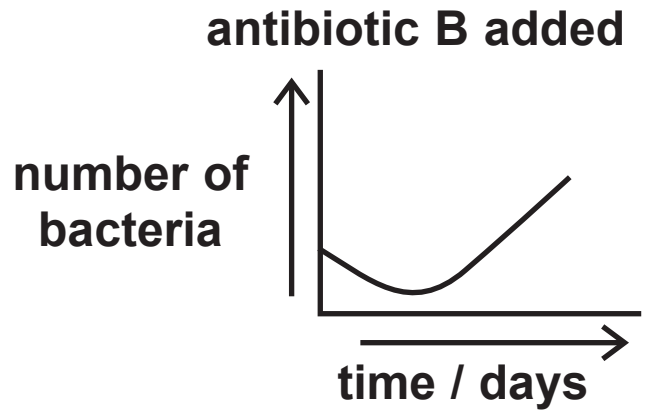
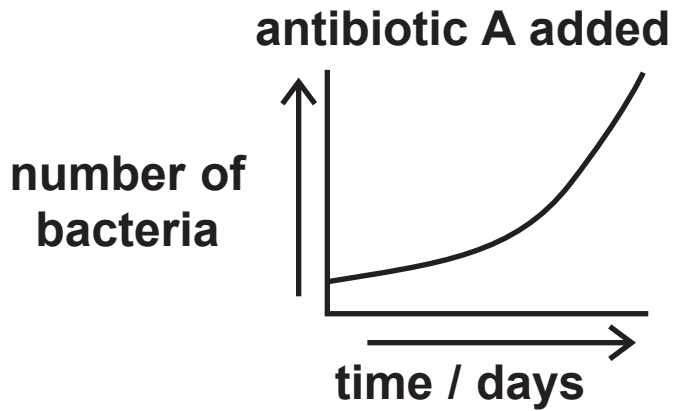
---

---

**(Question continues on next page)**



(b) The graphs show the effect of three different antibiotics on bacterial growth.



(Question continues on next page)

(Turn over)

- (i) Which of these is most effective at reducing the number of bacteria?

Put a cross (☒) in the box next to your answer. (1 mark)

- A antibiotic A
- B antibiotic B
- C antibiotic C
- D no antibiotic

(Question continues on next page)

- (ii) Explain how chemical defence mechanisms in the body reduce the chance of infection. (3 marks)

---

---

---

---

---

---

---

---

---

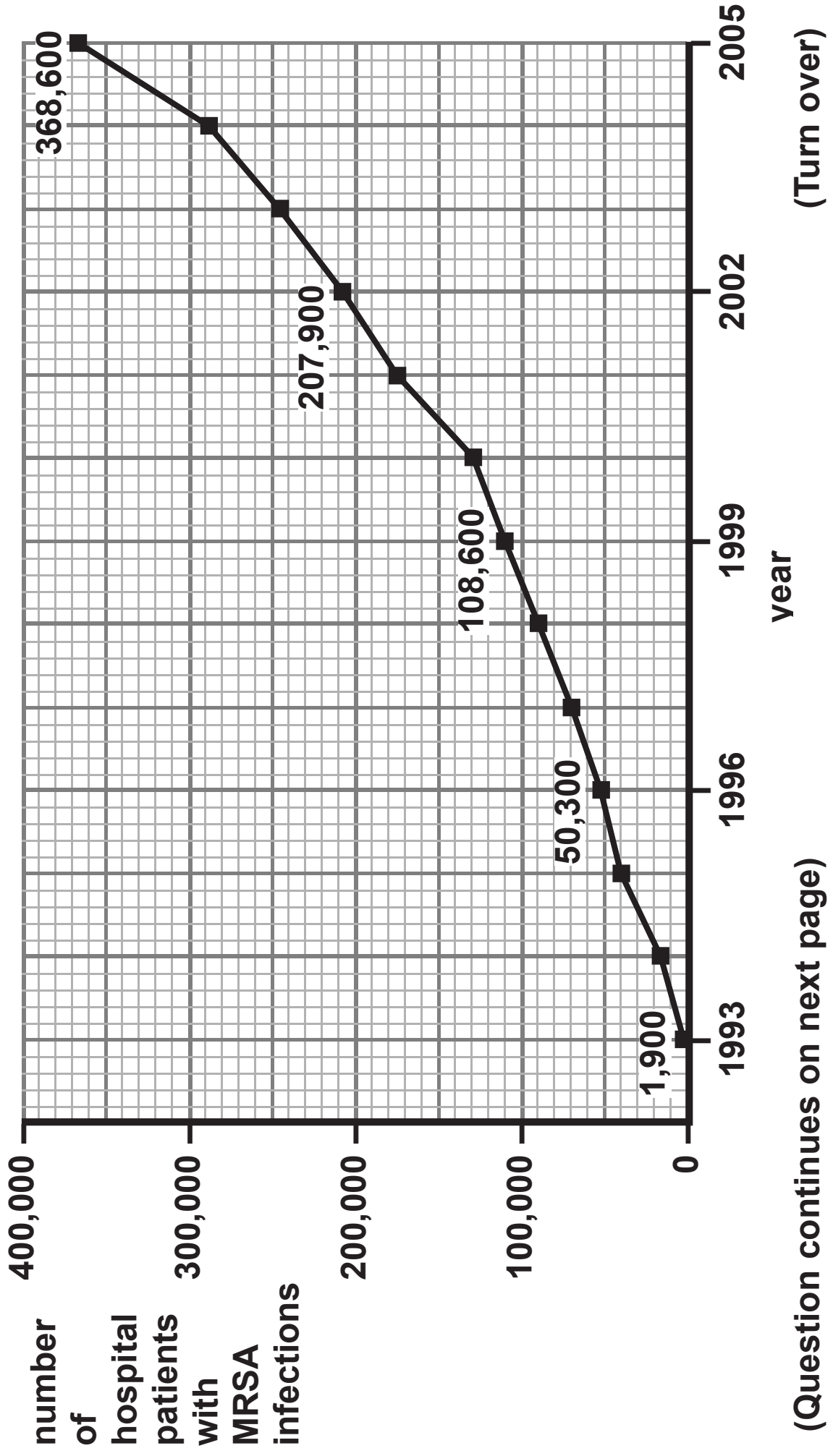
---

---

(Question continues on next page)

\*(c) MRSA is a bacterial infection.

The graph shows the number of cases of hospital patients with MRSA infections from 1993 to 2005.





---

---

---

---

Q6

(Total 12 marks)

--	--

---

**TOTAL FOR PAPER = 60 MARKS**

**END**