

Write your name here

Surname

Other names

**Pearson**  
**Edexcel GCSE**

Centre Number

--	--	--	--	--

Candidate Number

--	--	--	--	--

# Chemistry/Science

## Unit C1: Chemistry in Our World

**Higher Tier**

Thursday 14 May 2015 – Morning

**Time: 1 hour**

Paper Reference

**5CH1H/01**

**You must have:**

Calculator, ruler

Total Marks

### Instructions

- Use **black** ink or ball-point pen.
- **Fill in the boxes** at the top of this page with your name, centre number and candidate number.
- Answer **all** questions.
- Answer the questions in the spaces provided  
– *there may be more space than you need.*

### Information

- The total mark for this paper is 60.
- The marks for **each** question are shown in brackets  
– *use this as a guide as to how much time to spend on each question.*
- Questions labelled with an **asterisk** (\*) are ones where the quality of your written communication will be assessed  
– *you should take particular care with your spelling, punctuation and grammar, as well as the clarity of expression, on these questions.*

### Advice

- Read each question carefully before you start to answer it.
- Keep an eye on the time.
- Try to answer every question.
- Check your answers if you have time at the end.

Turn over ►

P44682A

©2015 Pearson Education Ltd.

1/1/1/1/



**PEARSON**

# The Periodic Table of the Elements

1	2	3	4	5	6	7	0	
7 <b>Li</b> lithium 3	9 <b>Be</b> beryllium 4	11 <b>Na</b> sodium 11	12 <b>C</b> carbon 6	13 <b>Al</b> aluminium 13	14 <b>N</b> nitrogen 7	15 <b>O</b> oxygen 8	16 <b>F</b> fluorine 9	18 <b>Ar</b> argon 18
19 <b>K</b> potassium 19	20 <b>Ca</b> calcium 20	23 <b>Sc</b> scandium 21	24 <b>Ti</b> titanium 22	25 <b>V</b> vanadium 23	26 <b>Cr</b> chromium 24	27 <b>Mn</b> manganese 25	28 <b>Fe</b> iron 26	30 <b>Zn</b> zinc 30
37 <b>Rb</b> rubidium 37	38 <b>Sr</b> strontium 38	39 <b>Y</b> yttrium 39	40 <b>Zr</b> zirconium 40	41 <b>Nb</b> niobium 41	42 <b>Mo</b> molybdenum 42	43 <b>Tc</b> technetium 43	44 <b>Ru</b> ruthenium 44	46 <b>Rh</b> rhodium 45
55 <b>Cs</b> caesium 55	56 <b>Ba</b> barium 56	57 <b>La*</b> lanthanum 57	72 <b>Hf</b> hafnium 72	73 <b>Ta</b> tantalum 73	74 <b>W</b> tungsten 74	75 <b>Re</b> rhenium 75	76 <b>Os</b> osmium 76	78 <b>Pt</b> platinum 78
[223] <b>Fr</b> francium 87	[226] <b>Ra</b> radium 88	[227] <b>Ac*</b> actinium 89	[261] <b>Rf</b> rutherfordium 104	[262] <b>Db</b> dubnium 105	[266] <b>Sg</b> seaborgium 106	[264] <b>Bh</b> bohrium 107	[277] <b>Hs</b> hassium 108	[272] <b>Rg</b> roentgenium 111
85 <b>Rb</b> rubidium 85	86 <b>Sr</b> strontium 86	87 <b>Y</b> yttrium 87	88 <b>Zr</b> zirconium 88	89 <b>Nb</b> niobium 89	90 <b>Mo</b> molybdenum 90	91 <b>Tc</b> technetium 91	92 <b>Ru</b> ruthenium 92	94 <b>Rh</b> rhodium 94
133 <b>Cs</b> caesium 133	137 <b>Ba</b> barium 137	138 <b>La*</b> lanthanum 138	178 <b>Hf</b> hafnium 178	179 <b>Ta</b> tantalum 179	180 <b>W</b> tungsten 180	181 <b>Re</b> rhenium 181	182 <b>Os</b> osmium 182	192 <b>Pt</b> platinum 192
101 <b>Rb</b> rubidium 101	102 <b>Sr</b> strontium 102	103 <b>Y</b> yttrium 103	104 <b>Zr</b> zirconium 104	105 <b>Nb</b> niobium 105	106 <b>Mo</b> molybdenum 106	107 <b>Tc</b> technetium 107	108 <b>Ru</b> ruthenium 108	110 <b>Rh</b> rhodium 110
119 <b>Rb</b> rubidium 119	120 <b>Sr</b> strontium 120	121 <b>Y</b> yttrium 121	122 <b>Zr</b> zirconium 122	123 <b>Nb</b> niobium 123	124 <b>Mo</b> molybdenum 124	125 <b>Tc</b> technetium 125	126 <b>Ru</b> ruthenium 126	136 <b>Rh</b> rhodium 136
127 <b>I</b> iodine 127	128 <b>Xe</b> xenon 128	129 <b>Y</b> yttrium 129	130 <b>Zr</b> zirconium 130	131 <b>Nb</b> niobium 131	132 <b>Mo</b> molybdenum 132	133 <b>Tc</b> technetium 133	134 <b>Ru</b> ruthenium 134	146 <b>Rh</b> rhodium 146
151 <b>Sb</b> antimony 151	152 <b>Te</b> tellurium 152	153 <b>Y</b> yttrium 153	154 <b>Zr</b> zirconium 154	155 <b>Nb</b> niobium 155	156 <b>Mo</b> molybdenum 156	157 <b>Tc</b> technetium 157	158 <b>Ru</b> ruthenium 158	168 <b>Rh</b> rhodium 168
165 <b>Bi</b> bismuth 165	166 <b>Po</b> polonium 166	167 <b>Y</b> yttrium 167	168 <b>Zr</b> zirconium 168	169 <b>Nb</b> niobium 169	170 <b>Mo</b> molybdenum 170	171 <b>Tc</b> technetium 171	172 <b>Ru</b> ruthenium 172	184 <b>Rh</b> rhodium 184
204 <b>Tl</b> thallium 204	205 <b>Pb</b> lead 205	206 <b>Bi</b> bismuth 206	207 <b>Po</b> polonium 207	208 <b>At</b> astatine 208	209 <b>Rn</b> radon 209	210 <b>Fr</b> francium 210	211 <b>Ra</b> radium 211	222 <b>Ac*</b> actinium 222
204 <b>Tl</b> thallium 204	205 <b>Pb</b> lead 205	206 <b>Bi</b> bismuth 206	207 <b>Po</b> polonium 207	208 <b>At</b> astatine 208	209 <b>Rn</b> radon 209	210 <b>Fr</b> francium 210	211 <b>Ra</b> radium 211	222 <b>Ac*</b> actinium 222
204 <b>Tl</b> thallium 204	205 <b>Pb</b> lead 205	206 <b>Bi</b> bismuth 206	207 <b>Po</b> polonium 207	208 <b>At</b> astatine 208	209 <b>Rn</b> radon 209	210 <b>Fr</b> francium 210	211 <b>Ra</b> radium 211	222 <b>Ac*</b> actinium 222
204 <b>Tl</b> thallium 204	205 <b>Pb</b> lead 205	206 <b>Bi</b> bismuth 206	207 <b>Po</b> polonium 207	208 <b>At</b> astatine 208	209 <b>Rn</b> radon 209	210 <b>Fr</b> francium 210	211 <b>Ra</b> radium 211	222 <b>Ac*</b> actinium 222
204 <b>Tl</b> thallium 204	205 <b>Pb</b> lead 205	206 <b>Bi</b> bismuth 206	207 <b>Po</b> polonium 207	208 <b>At</b> astatine 208	209 <b>Rn</b> radon 209	210 <b>Fr</b> francium 210	211 <b>Ra</b> radium 211	222 <b>Ac*</b> actinium 222
204 <b>Tl</b> thallium 204	205 <b>Pb</b> lead 205	206 <b>Bi</b> bismuth 206	207 <b>Po</b> polonium 207	208 <b>At</b> astatine 208	209 <b>Rn</b> radon 209	210 <b>Fr</b> francium 210	211 <b>Ra</b> radium 211	222 <b>Ac*</b> actinium 222
204 <b>Tl</b> thallium 204	205 <b>Pb</b> lead 205	206 <b>Bi</b> bismuth 206	207 <b>Po</b> polonium 207	208 <b>At</b> astatine 208	209 <b>Rn</b> radon 209	210 <b>Fr</b> francium 210	211 <b>Ra</b> radium 211	222 <b>Ac*</b> actinium 222
204 <b>Tl</b> thallium 204	205 <b>Pb</b> lead 205	206 <b>Bi</b> bismuth 206	207 <b>Po</b> polonium 207	208 <b>At</b> astatine 208	209 <b>Rn</b> radon 209	210 <b>Fr</b> francium 210	211 <b>Ra</b> radium 211	222 <b>Ac*</b> actinium 222
204 <b>Tl</b> thallium 204	205 <b>Pb</b> lead 205	206 <b>Bi</b> bismuth 206	207 <b>Po</b> polonium 207	208 <b>At</b> astatine 208	209 <b>Rn</b> radon 209	210 <b>Fr</b> francium 210	211 <b>Ra</b> radium 211	222 <b>Ac*</b> actinium 222
204 <b>Tl</b> thallium 204	205 <b>Pb</b> lead 205	206 <b>Bi</b> bismuth 206	207 <b>Po</b> polonium 207	208 <b>At</b> astatine 208	209 <b>Rn</b> radon 209	210 <b>Fr</b> francium 210	211 <b>Ra</b> radium 211	222 <b>Ac*</b> actinium 222
204 <b>Tl</b> thallium 204	205 <b>Pb</b> lead 205	206 <b>Bi</b> bismuth 206	207 <b>Po</b> polonium 207	208 <b>At</b> astatine 208	209 <b>Rn</b> radon 209	210 <b>Fr</b> francium 210	211 <b>Ra</b> radium 211	222 <b>Ac*</b> actinium 222
204 <b>Tl</b> thallium 204	205 <b>Pb</b> lead 205	206 <b>Bi</b> bismuth 206	207 <b>Po</b> polonium 207	208 <b>At</b> astatine 208	209 <b>Rn</b> radon 209	210 <b>Fr</b> francium 210	211 <b>Ra</b> radium 211	222 <b>Ac*</b> actinium 222
204 <b>Tl</b> thallium 204	205 <b>Pb</b> lead 205	206 <b>Bi</b> bismuth 206	207 <b>Po</b> polonium 207	208 <b>At</b> astatine 208	209 <b>Rn</b> radon 209	210 <b>Fr</b> francium 210	211 <b>Ra</b> radium 211	222 <b>Ac*</b> actinium 222
204 <b>Tl</b> thallium 204	205 <b>Pb</b> lead 205	206 <b>Bi</b> bismuth 206	207 <b>Po</b> polonium 207	208 <b>At</b> astatine 208	209 <b>Rn</b> radon 209	210 <b>Fr</b> francium 210	211 <b>Ra</b> radium 211	222 <b>Ac*</b> actinium 222
204 <b>Tl</b> thallium 204	205 <b>Pb</b> lead 205	206 <b>Bi</b> bismuth 206	207 <b>Po</b> polonium 207	208 <b>At</b> astatine 208	209 <b>Rn</b> radon 209	210 <b>Fr</b> francium 210	211 <b>Ra</b> radium 211	222 <b>Ac*</b> actinium 222
204 <b>Tl</b> thallium 204	205 <b>Pb</b> lead 205	206 <b>Bi</b> bismuth 206	207 <b>Po</b> polonium 207	208 <b>At</b> astatine 208	209 <b>Rn</b> radon 209	210 <b>Fr</b> francium 210	211 <b>Ra</b> radium 211	222 <b>Ac*</b> actinium 222
204 <b>Tl</b> thallium 204	205 <b>Pb</b> lead 205	206 <b>Bi</b> bismuth 206	207 <b>Po</b> polonium 207	208 <b>At</b> astatine 208	209 <b>Rn</b> radon 209	210 <b>Fr</b> francium 210	211 <b>Ra</b> radium 211	222 <b>Ac*</b> actinium 222
204 <b>Tl</b> thallium 204	205 <b>Pb</b> lead 205	206 <b>Bi</b> bismuth 206	207 <b>Po</b> polonium 207	208 <b>At</b> astatine 208	209 <b>Rn</b> radon 209	210 <b>Fr</b> francium 210	211 <b>Ra</b> radium 211	222 <b>Ac*</b> actinium 222
204 <b>Tl</b> thallium 204	205 <b>Pb</b> lead 205	206 <b>Bi</b> bismuth 206	207 <b>Po</b> polonium 207	208 <b>At</b> astatine 208	209 <b>Rn</b> radon 209	210 <b>Fr</b> francium 210	211 <b>Ra</b> radium 211	222 <b>Ac*</b> actinium 222
204 <b>Tl</b> thallium 204	205 <b>Pb</b> lead 205	206 <b>Bi</b> bismuth 206	207 <b>Po</b> polonium 207	208 <b>At</b> astatine 208	209 <b>Rn</b> radon 209	210 <b>Fr</b> francium 210	211 <b>Ra</b> radium 211	222 <b>Ac*</b> actinium 222
204 <b>Tl</b> thallium 204	205 <b>Pb</b> lead 205	206 <b>Bi</b> bismuth 206	207 <b>Po</b> polonium 207	208 <b>At</b> astatine 208	209 <b>Rn</b> radon 209	210 <b>Fr</b> francium 210	211 <b>Ra</b> radium 211	222 <b>Ac*</b> actinium 222
204 <b>Tl</b> thallium 204	205 <b>Pb</b> lead 205	206 <b>Bi</b> bismuth 206	207 <b>Po</b> polonium 207	208 <b>At</b> astatine 208	209 <b>Rn</b> radon 209	210 <b>Fr</b> francium 210	211 <b>Ra</b> radium 211	222 <b>Ac*</b> actinium 222
204 <b>Tl</b> thallium 204	205 <b>Pb</b> lead 205	206 <b>Bi</b> bismuth 206	207 <b>Po</b> polonium 207	208 <b>At</b> astatine 208	209 <b>Rn</b> radon 209	210 <b>Fr</b> francium 210	211 <b>Ra</b> radium 211	222 <b>Ac*</b> actinium 222
204 <b>Tl</b> thallium 204	205 <b>Pb</b> lead 205	206 <b>Bi</b> bismuth 206	207 <b>Po</b> polonium 207	208 <b>At</b> astatine 208	209 <b>Rn</b> radon 209	210 <b>Fr</b> francium 210	211 <b>Ra</b> radium 211	222 <b>Ac*</b> actinium 222
204 <b>Tl</b> thallium 204	205 <b>Pb</b> lead 205	206 <b>Bi</b> bismuth 206	207 <b>Po</b> polonium 207	208 <b>At</b> astatine 208	209 <b>Rn</b> radon 209	210 <b>Fr</b> francium 210	211 <b>Ra</b> radium 211	222 <b>Ac*</b> actinium 222
204 <b>Tl</b> thallium 204	205 <b>Pb</b> lead 205	206 <b>Bi</b> bismuth 206	207 <b>Po</b> polonium 207	208 <b>At</b> astatine 208	209 <b>Rn</b> radon 209	210 <b>Fr</b> francium 210	211 <b>Ra</b> radium 211	222 <b>Ac*</b> actinium 222
204 <b>Tl</b> thallium 204	205 <b>Pb</b> lead 205	206 <b>Bi</b> bismuth 206	207 <b>Po</b> polonium 207	208 <b>At</b> astatine 208	209 <b>Rn</b> radon 209	210 <b>Fr</b> francium 210	211 <b>Ra</b> radium 211	222 <b>Ac*</b> actinium 222
204 <b>Tl</b> thallium 204	205 <b>Pb</b> lead 205	206 <b>Bi</b> bismuth 206	207 <b>Po</b> polonium 207	208 <b>At</b> astatine 208	209 <b>Rn</b> radon 209	210 <b>Fr</b> francium 210	211 <b>Ra</b> radium 211	222 <b>Ac*</b> actinium 222
204 <b>Tl</b> thallium 204	205 <b>Pb</b> lead 205	206 <b>Bi</b> bismuth 206	207 <b>Po</b> polonium 207	208 <b>At</b> astatine 208	209 <b>Rn</b> radon 209	210 <b>Fr</b> francium 210	211 <b>Ra</b> radium 211	222 <b>Ac*</b> actinium 222
204 <b>Tl</b> thallium 204	205 <b>Pb</b> lead 205	206 <b>Bi</b> bismuth 206	207 <b>Po</b> polonium 207	208 <b>At</b> astatine 208	209 <b>Rn</b> radon 209	210 <b>Fr</b> francium 210	211 <b>Ra</b> radium 211	222 <b>Ac*</b> actinium 222
204 <b>Tl</b> thallium 204	205 <b>Pb</b> lead 205	206 <b>Bi</b> bismuth 206	207 <b>Po</b> polonium 207	208 <b>At</b> astatine 208	209 <b>Rn</b> radon 209	210 <b>Fr</b> francium 210	211 <b>Ra</b> radium 211	222 <b>Ac*</b> actinium 222
204 <b>Tl</b> thallium 204	205 <b>Pb</b> lead 205	206 <b>Bi</b> bismuth 206	207 <b>Po</b> polonium 207	208 <b>At</b> astatine 208	209 <b>Rn</b> radon 209	210 <b>Fr</b> francium 210	211 <b>Ra</b> radium 211	222 <b>Ac*</b> actinium 222
204 <b>Tl</b> thallium 204	205 <b>Pb</b> lead 205	206 <b>Bi</b> bismuth 206	207 <b>Po</b> polonium 207	208 <b>At</b> astatine 208	209 <b>Rn</b> radon 209	210 <b>Fr</b> francium 210	211 <b>Ra</b> radium 211	222 <b>Ac*</b> actinium 222
204 <b>Tl</b> thallium 204	205 <b>Pb</b> lead 205	206 <b>Bi</b> bismuth 206	207 <b>Po</b> polonium 207	208 <b>At</b> astatine 208	209 <b>Rn</b> radon 209	210 <b>Fr</b> francium 210	211 <b>Ra</b> radium 211	222 <b>Ac*</b> actinium 222
204 <b>Tl</b> thallium 204	205 <b>Pb</b> lead 205	206 <b>Bi</b> bismuth 206	207 <b>Po</b> polonium 207	208 <b>At</b> astatine 208	209 <b>Rn</b> radon 209	210 <b>Fr</b> francium 210	211 <b>Ra</b> radium 211	222 <b>Ac*</b> actinium 222
204 <b>Tl</b> thallium 204	205 <b>Pb</b> lead 205	206 <b>Bi</b> bismuth 206	207 <b>Po</b> polonium 207	208 <b>At</b> astatine 208	209 <b>Rn</b> radon 209	210 <b>Fr</b> francium 210	211 <b>Ra</b> radium 211	222 <b>Ac*</b> actinium 222
204 <b>Tl</b> thallium 204	205 <b>Pb</b> lead 205	206 <b>Bi</b> bismuth 206	207 <b>Po</b> polonium 207	208 <b>At</b> astatine 208	209 <b>Rn</b> radon 209	210 <b>Fr</b> francium 210	211 <b>Ra</b> radium 211	222 <b>Ac*</b> actinium 222
204 <b>Tl</b> thallium 204	205 <b>Pb</b> lead 205	206 <b>Bi</b> bismuth 206	207 <b>Po</b> polonium 207	208 <b>At</b> astatine 208	209 <b>Rn</b> radon 209	210 <b>Fr</b> francium 210	211 <b>Ra</b> radium 211	222 <b>Ac*</b> actinium 222
204 <b>Tl</b> thallium 204	205 <b>Pb</b> lead 205	206 <b>Bi</b> bismuth 206	207 <b>Po</b> polonium 207	208 <b>At</b> ast				

**BLANK PAGE**

**Questions begin on next page.**



**Answer ALL questions**

**Some questions must be answered with a cross in a box ☒. If you change your mind about an answer, put a line through the box ~~☒~~ and then mark your new answer with a cross ☒.**

**Limestone**

**1** Limestone is a sedimentary rock.

(a) Describe how sedimentary rocks, such as limestone, are formed.

(3)

.....

.....

.....

.....

.....

.....

(b) Limestone in the Earth's crust is converted into marble by the action of heat and pressure.

State the type of rock formed.

(1)

.....



(c) Limestone is a natural form of calcium carbonate.

A piece of calcium carbonate is heated strongly.

It forms solid calcium oxide and a gas.

The masses of the solids before and after heating were found.

mass of calcium carbonate before heating = 3.75 g

mass of calcium oxide remaining after heating = 2.10 g

(i) Calculate the mass of gas that was given off.

(1)

mass of gas given off = ..... g

(ii) Complete the sentence by putting a cross (☒) in the box next to your answer.

The gas given off when calcium carbonate is heated is

(1)

A carbon

B oxygen

C carbon monoxide

D carbon dioxide

(d) Calcium carbonate and calcium hydroxide are both used by farmers to treat some soils.

Explain why calcium carbonate and calcium hydroxide are used in this way.

(2)

(Total for Question 1 = 8 marks)

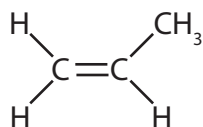


**BLANK PAGE**



## Propene

2 The structure of a molecule of propene is



(a) Propene is an unsaturated hydrocarbon.

(i) Explain what is meant by **unsaturated hydrocarbon**.

(3)

.....

.....

.....

.....

(ii) Complete the sentence by putting a cross (☒) in the box next to your answer.

Propene can be made by using heat to decompose large alkane molecules into smaller, more useful molecules.

This process is known as

(1)

- A combustion
- B cracking
- C fractional distillation
- D polymerisation

(iii) Describe what is seen when a sample of propene is shaken with bromine water.

(2)

.....

.....

.....

.....



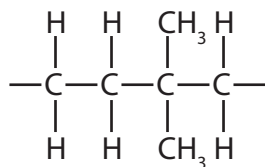
(b) Molecules of propene can be combined to form a molecule of poly(propene).

(i) Which of these shows part of the structure of a molecule of poly(propene)?

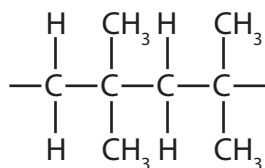
Put a cross (☒) in the box next to your answer.

(1)

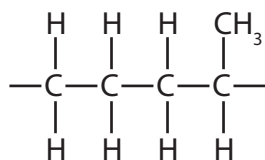
**A**



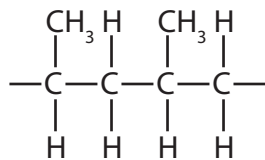
**B**



**C**



**D**





(ii) Ropes used on boats are often made from poly(propene).

poly(propene) rope



State a property of poly(propene) that makes it suitable for use as ropes on boats.

(1)

(iii) State a problem caused by the disposal of poly(propene) ropes in landfill sites.

(1)

**(Total for Question 2 = 9 marks)**



## The atmosphere

3 The Earth's atmosphere today has changed, when compared with the Earth's earliest atmosphere.

(a) Two processes that caused changes were the cooling of the atmosphere and photosynthesis.

(i) State how cooling changed the composition of the Earth's atmosphere.

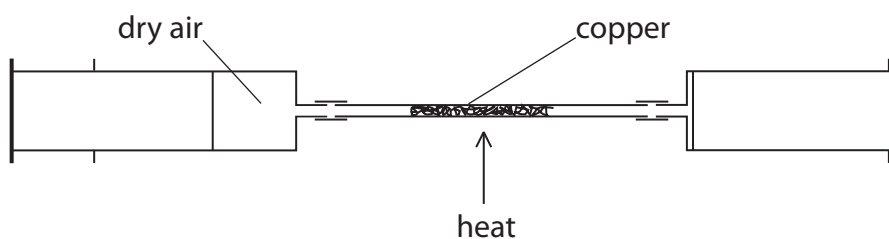
(1)

(ii) Explain how photosynthesis changed the composition of the Earth's atmosphere.

(2)

(b) In an experiment, dry air is passed backwards and forwards over hot, excess copper in the apparatus shown.

The oxygen in the air reacts with the hot copper to form copper oxide, CuO.



(i) Write the balanced equation for the reaction of copper with oxygen.

(3)



(ii) When the copper has reacted with all the oxygen, the apparatus is allowed to cool.

The initial volume of dry air in the apparatus was  $50 \text{ cm}^3$ , measured at room temperature and pressure.

During the experiment the volume of gas in the apparatus decreased.

Calculate the final volume of gas remaining in the apparatus after allowing it to cool to room temperature.

(percentage of oxygen in dry air is 21%)

(2)

.....

.....

.....

.....

final volume of gas remaining in apparatus = .....  $\text{cm}^3$

(iii) Complete the sentence by putting a cross (☒) in the box next to your answer.

After the reaction between dry air and copper is complete, most of the gas remaining in the apparatus is

(1)

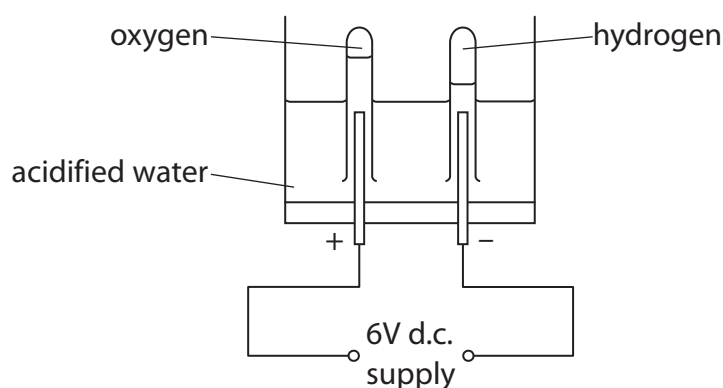
- A argon
- B carbon dioxide
- C nitrogen
- D oxygen

**(Total for Question 3 = 9 marks)**



### Electrolysis and acids

- 4 (a) Water, acidified with a small amount of dilute sulfuric acid, can be decomposed by electrolysis using the apparatus shown.



- (i) State the form of energy used to carry out the electrolysis.

(1)

- (ii) During the electrolysis, hydrogen is formed at one of the electrodes.

Describe a test to show that this gas is hydrogen.

(2)

- (b) Electrolysis is also used to produce chlorine on a large scale.

Name a raw material that can be electrolysed to produce chlorine.

(1)



(c) (i) Complete the sentence by putting a cross (☒) in the box next to your answer.

Acids are neutralised by metal hydroxides to form

(1)

- A salt only
- B salt and hydrogen only
- C salt and oxygen only
- D salt and water only

(ii) Acids can also be neutralised by metal carbonates.

Dilute sulfuric acid is neutralised by copper carbonate as shown in the word equation.



Copper carbonate is a green powder.

Describe what you would **see** when copper carbonate powder is added to dilute sulfuric acid.

(2)

.....

.....

.....

.....



- (d) Two experiments were carried out to test the effectiveness of tablets of three different indigestion remedies, A, B and C.

For each remedy, the experiments were carried out on both a whole and a crushed tablet.

In experiment 1, each tablet was added to excess hydrochloric acid and the time taken for the tablet to react completely was recorded.

In experiment 2, the volume of acid neutralised by each tablet was determined.

The table shows the results obtained for the investigation.

tablet of	state of tablet	experiment 1 : time taken for the tablet to react completely / s	experiment 2 : volume of acid neutralised / cm <sup>3</sup>
A	whole	75	25.0
	crushed	30	25.0
B	whole	59	25.0
	crushed	19	25.0
C	whole	120	50.0
	crushed	44	50.0

- (i) Explain, using information from the table, which of the tablets contains the most of the active ingredient to overcome indigestion.

(2)

.....

.....

.....

.....

- (ii) Explain, using information from the table, whether faster relief of indigestion is achieved by using a given tablet whole or crushed.

(1)

.....

.....

.....

**(Total for Question 4 = 10 marks)**



**BLANK PAGE**



## Fuels and crude oil

- 5 (a) Some fuels are better fuels than others.

State one factor that makes a good fuel.

(1)

.....

.....

- (b) Bioethanol is a fuel that can be obtained from the plant, sugar beet.

- (i) Bioethanol and petrol can both be used as fuels.

Explain one advantage of using bioethanol produced from sugar beet, rather than petrol produced from crude oil.

(2)

.....

.....

.....

.....

- (ii) The main component of bioethanol is ethanol.

When burnt completely, ethanol,  $C_2H_5OH$ , reacts with oxygen to produce carbon dioxide and water.

Write the balanced equation for this reaction.

(3)

.....









## Metals

6 The list shows some metals in order of reactivity.

<b>most reactive</b>	sodium
	aluminium
	zinc
	iron
	copper
<b>least reactive</b>	gold

(a) Aluminium and iron are extracted by reduction of their oxides.

State what is meant by reduction.

(1)

(b) Electrolysis and heating with carbon are two methods of reduction.

Explain why aluminium needs to be extracted from its ore by electrolysis, rather than by heating with carbon.

(2)

(c) Iron is extracted from iron oxide,  $\text{Fe}_2\text{O}_3$ .

In the extraction process the iron oxide is heated with carbon to form iron and carbon dioxide.

Write the balanced equation for this reaction.

(3)





(Total for Question 6 = 12 marks)

**TOTAL FOR PAPER = 60 MARKS**



**BLANK PAGE**



**BLANK PAGE**



**BLANK PAGE**

Every effort has been made to contact copyright holders to obtain their permission for the use of copyright material. Pearson Education Ltd. will, if notified, be happy to rectify any errors or omissions and include any such rectifications in future editions.

