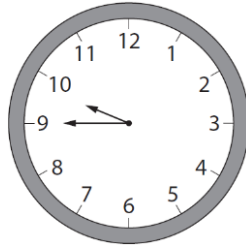


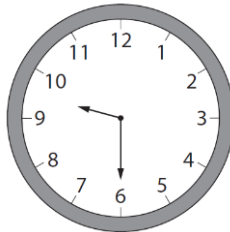
Functional Skills Maths | Entry 2 | Time | Job Centre

1. Magda has a meeting at the job centre.
The clock shows the time of the meeting.



When does the meeting start?

2. Yusuf has a meeting with a work coach.
The clock shows the time the meeting starts.



The meeting last one hour.

What time does the meeting end?

3. Ade is going to the job centre for a Claimant Commitment meeting. The appointment is at 2 o'clock in the afternoon. It finishes one hour later.

What time does the meeting finish?

Please tick the correct answer.

09 : 00

()

12 : 00

()

13 : 00

()

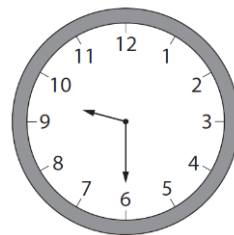
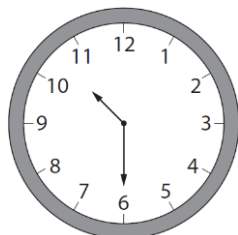
15 : 00

()


4. Fatima is going to a workshop on CV writing.

The workshop starts at 10.30am.

Which clock shows the correct time?



5. The clock shows the time that Olek has a meeting to discuss work.



What time is his meeting?

Please tick the correct answer.

a quarter to seven o'clock ()

a quarter past eight o'clock ()

a quarter to eight o'clock ()

a quarter past seven o'clock ()

6. Chris is doing a course to help his computer skills.

The clock shows the time course starts.



Chris thinks the course starts at five o'clock in the afternoon.

Is he correct?

Show why you think this.

7. Miriam has meeting to practice interview skills in the afternoon.
She chooses a time between 5 o'clock and 7 o'clock.

Which time does she choose?

20:00

()

07:00

()

18:00

()

16:00

()