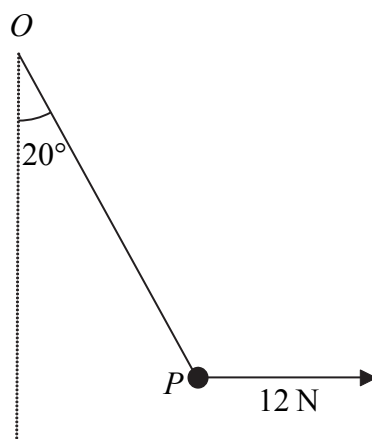




1.

Figure 1



A particle  $P$  is attached to one end of a light inextensible string. The other end of the string is attached to a fixed point  $O$ . A horizontal force of magnitude  $12\text{ N}$  is applied to  $P$ . The particle  $P$  is in equilibrium with the string taut and  $OP$  making an angle of  $20^\circ$  with the downward vertical, as shown in Figure 1.

Find

(a) the tension in the string, (3)

(b) the weight of  $P$ . (4)

---

---

---

---

---

---

---

---

---

---

---

---

---

---

---

---

---

---

---

---

---

---

---

---



Leave  
blank

**Question 1 continued**

Lined area for writing the answer to Question 1.

**(Total 7 marks)**

**Q1**



N 2 6 1 1 4 A 0 3 2 0



**Question 2 continued**

Leave blank

Handwriting practice area consisting of approximately 34 horizontal lines.

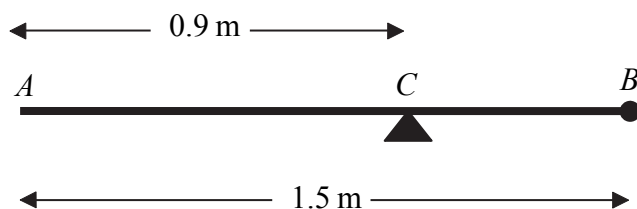
**Q2**

**(Total 7 marks)**



3.

**Figure 2**



A uniform rod  $AB$  has length 1.5 m and mass 8 kg. A particle of mass  $m$  kg is attached to the rod at  $B$ . The rod is supported at the point  $C$ , where  $AC=0.9$  m, and the system is in equilibrium with  $AB$  horizontal, as shown in Figure 2.

(a) Show that  $m = 2$ . (4)

A particle of mass 5 kg is now attached to the rod at  $A$  and the support is moved from  $C$  to a point  $D$  of the rod. The system, including both particles, is again in equilibrium with  $AB$  horizontal.

(b) Find the distance  $AD$ . (5)

---

---

---

---

---

---

---

---

---

---

---

---

---

---

---

---

---

---

---

---

---

---

---





4. A car is moving along a straight horizontal road. At time  $t=0$ , the car passes a point  $A$  with speed  $25 \text{ m s}^{-1}$ . The car moves with constant speed  $25 \text{ m s}^{-1}$  until  $t=10 \text{ s}$ . The car then decelerates uniformly for  $8 \text{ s}$ . At time  $t=18 \text{ s}$ , the speed of the car is  $V \text{ m s}^{-1}$  and this speed is maintained until the car reaches the point  $B$  at time  $t=30 \text{ s}$ .

- (a) Sketch, in the space below, a speed–time graph to show the motion of the car from  $A$  to  $B$ . (3)

Given that  $AB = 526 \text{ m}$ , find

- (b) the value of  $V$ , (5)

- (c) the deceleration of the car between  $t=10 \text{ s}$  and  $t=18 \text{ s}$ . (3)

---

---

---

---

---

---

---

---

---

---









**Question 4 continued**

Leave  
blank

Lined writing area for the answer to Question 4.

**(Total 11 marks)**

**Q4**

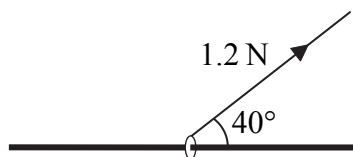
--	--



N 2 6 1 1 4 A 0 1 1 2 0

5.

Figure 3



A small ring of mass 0.25 kg is threaded on a fixed rough horizontal rod. The ring is pulled upwards by a light string which makes an angle  $40^\circ$  with the horizontal, as shown in Figure 3. The string and the rod are in the same vertical plane. The tension in the string is 1.2 N and the coefficient of friction between the ring and the rod is  $\mu$ . Given that the ring is in limiting equilibrium, find

(a) the normal reaction between the ring and the rod,

(4)

(b) the value of  $\mu$ .

(6)

---

---

---

---

---

---

---

---

---

---

---

---

---

---

---

---

---

---

---

---

---

---

---

---

---

---

---

---

---

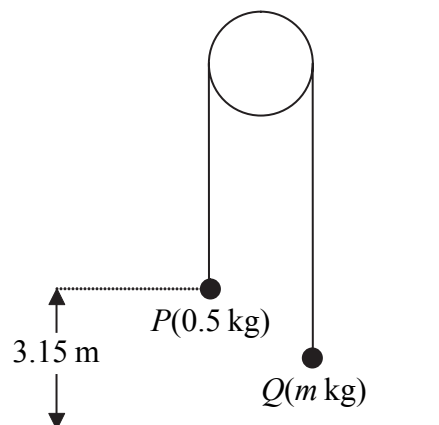
---





6.

Figure 4



Two particles  $P$  and  $Q$  have mass  $0.5$  kg and  $m$  kg respectively, where  $m < 0.5$ . The particles are connected by a light inextensible string which passes over a smooth, fixed pulley. Initially  $P$  is  $3.15$  m above horizontal ground. The particles are released from rest with the string taut and the hanging parts of the string vertical, as shown in Figure 4. After  $P$  has been descending for  $1.5$  s, it strikes the ground. Particle  $P$  reaches the ground before  $Q$  has reached the pulley.

- (a) Show that the acceleration of  $P$  as it descends is  $2.8 \text{ m s}^{-2}$ . (3)
- (b) Find the tension in the string as  $P$  descends. (3)
- (c) Show that  $m = \frac{5}{18}$ . (4)
- (d) State how you have used the information that the string is inextensible. (1)

When  $P$  strikes the ground,  $P$  does not rebound and the string becomes slack. Particle  $Q$  then moves freely under gravity, without reaching the pulley, until the string becomes taut again.

- (e) Find the time between the instant when  $P$  strikes the ground and the instant when the string becomes taut again. (6)

---

---

---

---

---

---

---

---

---

---



Leave blank

**Question 6 continued**

Lined area for writing answers to Question 6.



N 2 6 1 1 4 A 0 1 5 2 0











