

Question 1 continued

A large rectangular area containing approximately 32 horizontal lines for writing an answer.

(Total 6 marks)

Leave
blank

Q1



Leave
blank

Question 2 continued

Lined area for writing the answer to Question 2.

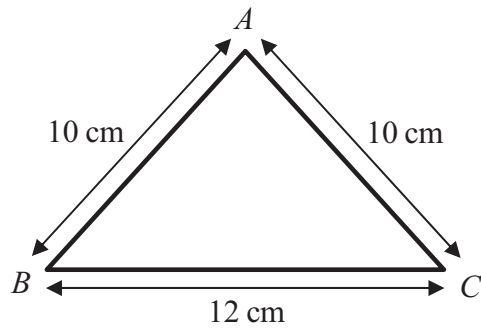
5

Turn over



N 3 5 3 9 1 A 0 5 3 2

3.

**Figure 1**

A triangular frame is formed by cutting a uniform rod into 3 pieces which are then joined to form a triangle ABC , where $AB = AC = 10\text{ cm}$ and $BC = 12\text{ cm}$, as shown in Figure 1.

- (a) Find the distance of the centre of mass of the frame from BC . (5)

The frame has total mass M . A particle of mass M is attached to the frame at the mid-point of BC . The frame is then freely suspended from B and hangs in equilibrium.

- (b) Find the size of the angle between BC and the vertical. (4)





Question 3 continued

Lined writing area for the answer to Question 3.

Leave blank

Q3

(Total 9 marks)



Question 4 continued

Leave blank

Lined area for writing answers.



5. [In this question \mathbf{i} and \mathbf{j} are perpendicular unit vectors in a horizontal plane.]

A ball of mass 0.5 kg is moving with velocity $(10\mathbf{i} + 24\mathbf{j})\text{ ms}^{-1}$ when it is struck by a bat. Immediately after the impact the ball is moving with velocity $20\mathbf{i}\text{ ms}^{-1}$.

Find

- (a) the magnitude of the impulse of the bat on the ball, (4)
- (b) the size of the angle between the vector \mathbf{i} and the impulse exerted by the bat on the ball, (2)
- (c) the kinetic energy lost by the ball in the impact. (3)



Question 5 continued

Leave
blank

Lined writing area for the answer to Question 5.



6.

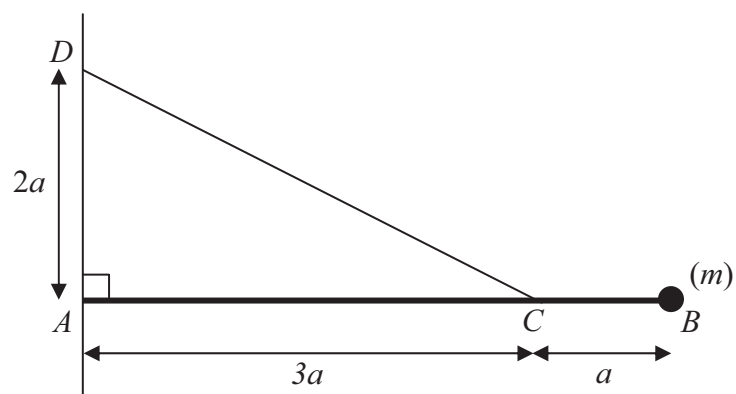


Figure 2

Figure 2 shows a uniform rod AB of mass m and length $4a$. The end A of the rod is freely hinged to a point on a vertical wall. A particle of mass m is attached to the rod at B . One end of a light inextensible string is attached to the rod at C , where $AC = 3a$. The other end of the string is attached to the wall at D , where $AD = 2a$ and D is vertically above A . The rod rests horizontally in equilibrium in a vertical plane perpendicular to the wall and the tension in the string is T .

(a) Show that $T = mg\sqrt{13}$. (5)

The particle of mass m at B is removed from the rod and replaced by a particle of mass M which is attached to the rod at B . The string breaks if the tension exceeds $2mg\sqrt{13}$. Given that the string does not break,

(b) show that $M \leq \frac{5}{2}m$. (3)



7.

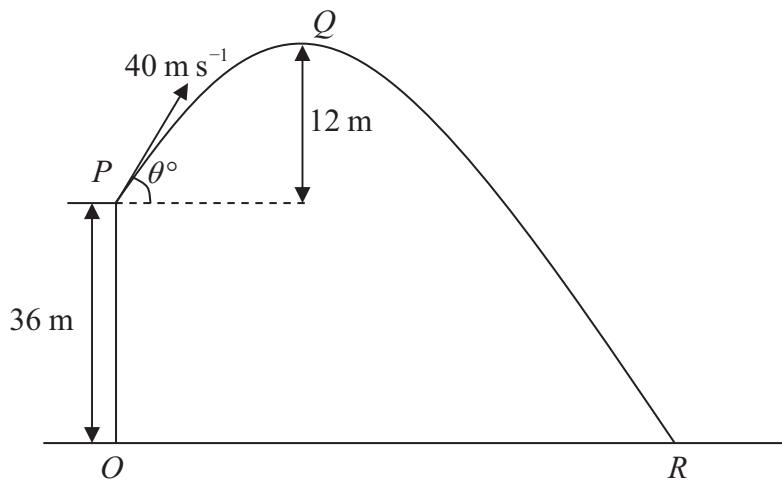


Figure 3

A ball is projected with speed 40 m s^{-1} from a point P on a cliff above horizontal ground. The point O on the ground is vertically below P and OP is 36 m . The ball is projected at an angle θ° to the horizontal. The point Q is the highest point of the path of the ball and is 12 m above the level of P . The ball moves freely under gravity and hits the ground at the point R , as shown in Figure 3. Find

- (a) the value of θ , (3)

- (b) the distance OR , (6)

- (c) the speed of the ball as it hits the ground at R . (3)



Question 7 continued

Leave
blank

Ruled area for writing answers to Question 7.





Question 7 continued

Blank lined area for writing the answer to Question 7.

Leave blank

(Total 12 marks)

Q7

27

Turn over



8. A small ball A of mass $3m$ is moving with speed u in a straight line on a smooth horizontal table. The ball collides directly with another small ball B of mass m moving with speed u towards A along the same straight line. The coefficient of restitution between A and B is $\frac{1}{2}$. The balls have the same radius and can be modelled as particles.

(a) Find

(i) the speed of A immediately after the collision,

(ii) the speed of B immediately after the collision.

(7)

After the collision B hits a smooth vertical wall which is perpendicular to the direction of motion of B . The coefficient of restitution between B and the wall is $\frac{2}{5}$.

(b) Find the speed of B immediately after hitting the wall.

(2)

The first collision between A and B occurred at a distance $4a$ from the wall. The balls collide again T seconds after the first collision.

(c) Show that $T = \frac{112a}{15u}$.

(6)



